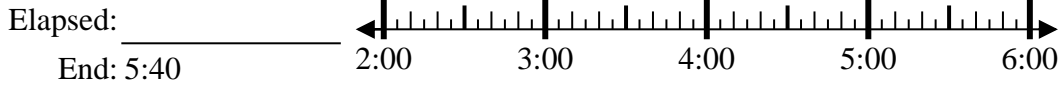




Solve each problem.

Answers

1) Start: 2:50



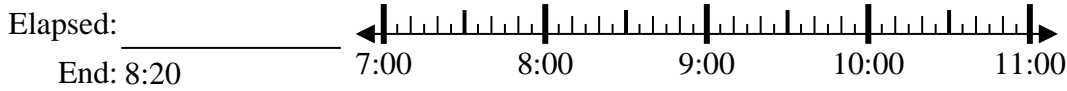
1. \_\_\_\_\_

2) Start: 9:10



2. \_\_\_\_\_

3) Start: 7:05



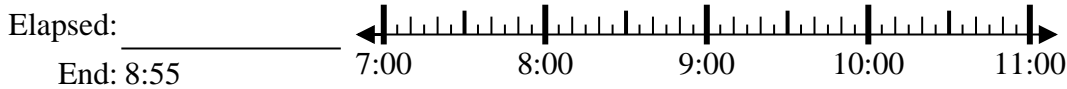
3. \_\_\_\_\_

4) Start: 3:00



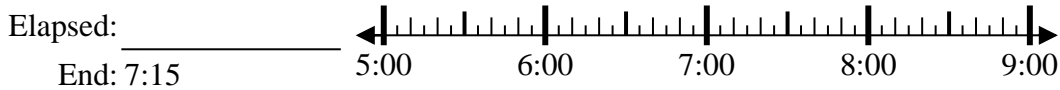
4. \_\_\_\_\_

5) Start: 7:15



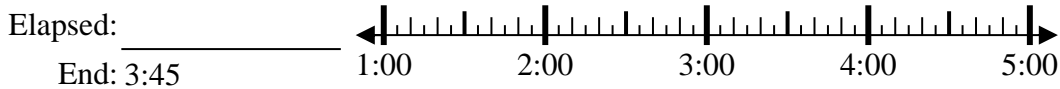
5. \_\_\_\_\_

6) Start: 5:00



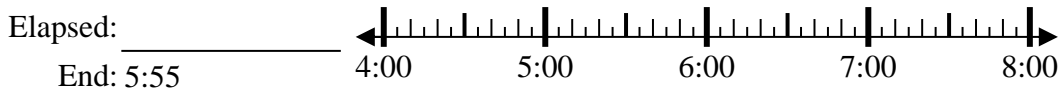
6. \_\_\_\_\_

7) Start: 1:00



7. \_\_\_\_\_

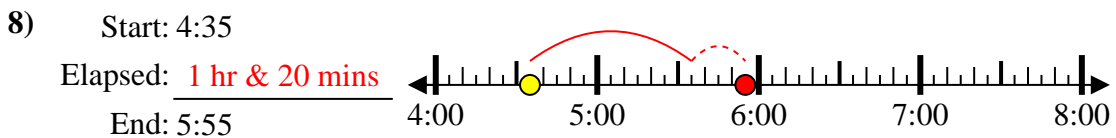
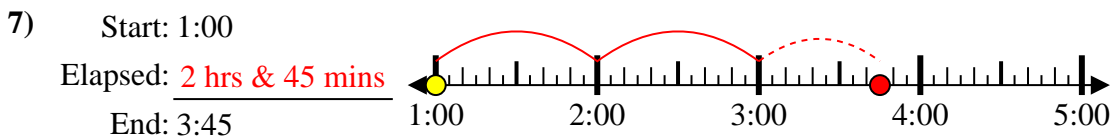
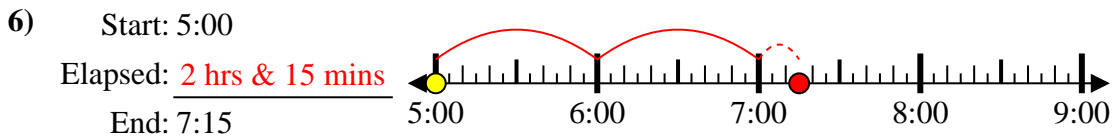
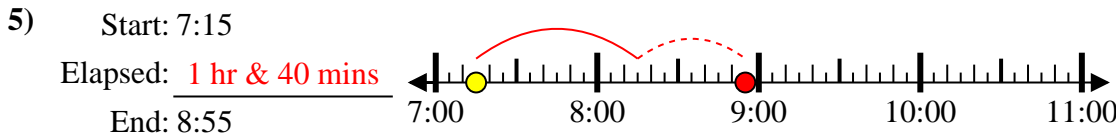
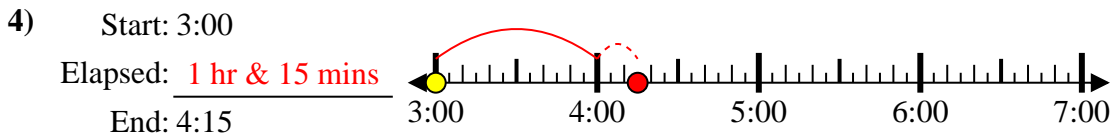
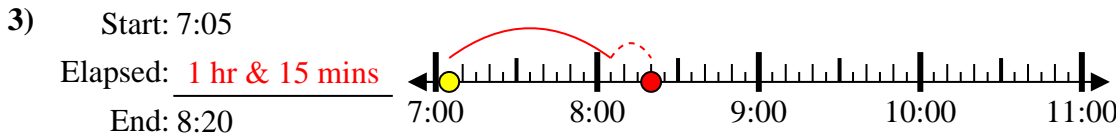
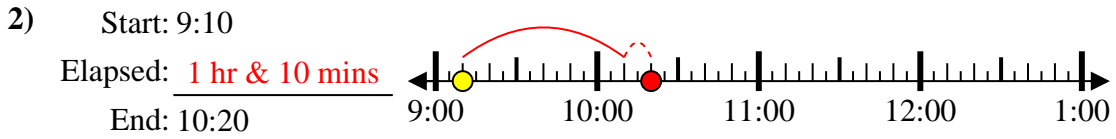
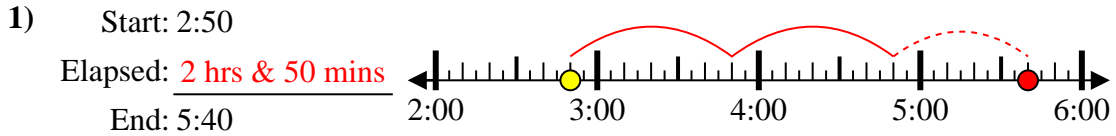
8) Start: 4:35



8. \_\_\_\_\_



Solve each problem.



Answers

1. 2 hrs & 50 mins

2. 1 hr & 10 mins

3. 1 hr & 15 mins

4. 1 hr & 15 mins

5. 1 hr & 40 mins

6. 2 hrs & 15 mins

7. 2 hrs & 45 mins

8. 1 hr & 20 mins