



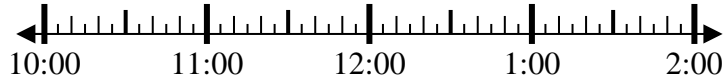
Solve each problem.

Answers

1) Start: 10:50

Elapsed: 2 hrs & 30 mins

End: _____

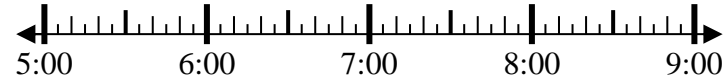


1. _____

2) Start: 5:10

Elapsed: 1 hr & 25 mins

End: _____

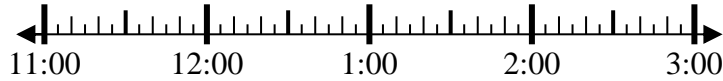


2. _____

3) Start: 11:40

Elapsed: 1 hr & 35 mins

End: _____

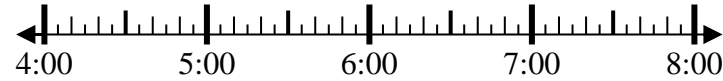


3. _____

4) Start: 4:20

Elapsed: 2 hrs & 15 mins

End: _____

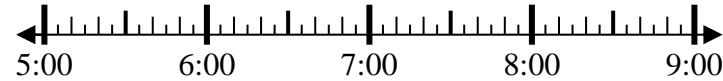


4. _____

5) Start: 5:15

Elapsed: 2 hrs & 25 mins

End: _____

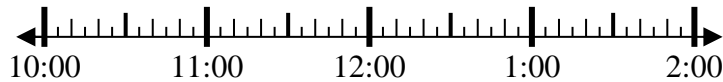


5. _____

6) Start: 10:20

Elapsed: 2 hrs & 35 mins

End: _____



6. _____

7) Start: 12:45

Elapsed: 2 hrs & 50 mins

End: _____



7. _____

8) Start: 10:40

Elapsed: 1 hr & 30 mins

End: _____



8. _____



Solve each problem.

1) Start: 10:50
 Elapsed: 2 hrs & 30 mins
 End: 1:20

2) Start: 5:10
 Elapsed: 1 hr & 25 mins
 End: 6:35

3) Start: 11:40
 Elapsed: 1 hr & 35 mins
 End: 1:15

4) Start: 4:20
 Elapsed: 2 hrs & 15 mins
 End: 6:35

5) Start: 5:15
 Elapsed: 2 hrs & 25 mins
 End: 7:40

6) Start: 10:20
 Elapsed: 2 hrs & 35 mins
 End: 12:55

7) Start: 12:45
 Elapsed: 2 hrs & 50 mins
 End: 3:35

8) Start: 10:40
 Elapsed: 1 hr & 30 mins
 End: 12:10

Answers

1. 1:20

2. 6:35

3. 1:15

4. 6:35

5. 7:40

6. 12:55

7. 3:35

8. 12:10