



Solve each problem.

Answers

1) Start: _____
 Elapsed: 2 hrs & 30 mins
 End: 12:05

1. _____

2) Start: _____
 Elapsed: 1 hr & 45 mins
 End: 2:35

2. _____

3) Start: _____
 Elapsed: 1 hr & 25 mins
 End: 11:40

3. _____

4) Start: _____
 Elapsed: 1 hr & 45 mins
 End: 8:10

4. _____

5) Start: _____
 Elapsed: 1 hr & 15 mins
 End: 10:25

5. _____

6) Start: _____
 Elapsed: 2 hrs & 15 mins
 End: 2:00

6. _____

7) Start: _____
 Elapsed: 1 hr & 40 mins
 End: 2:00

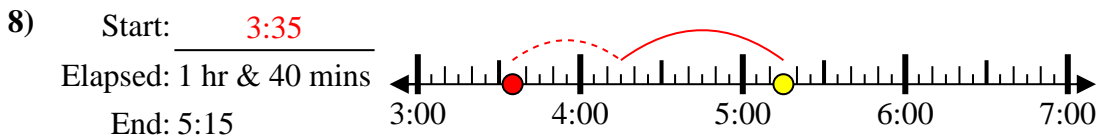
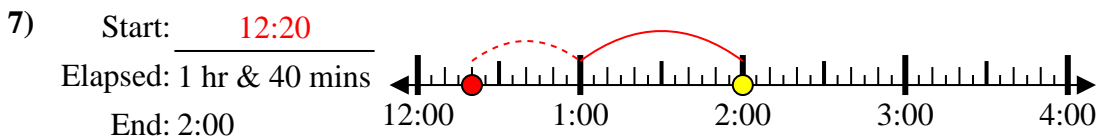
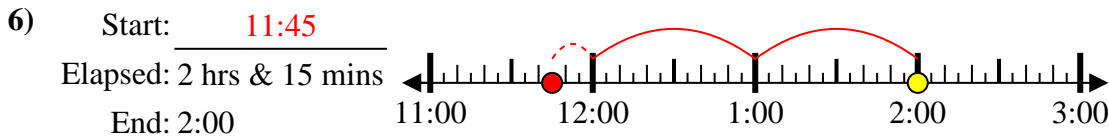
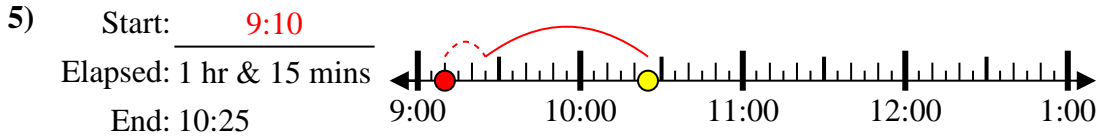
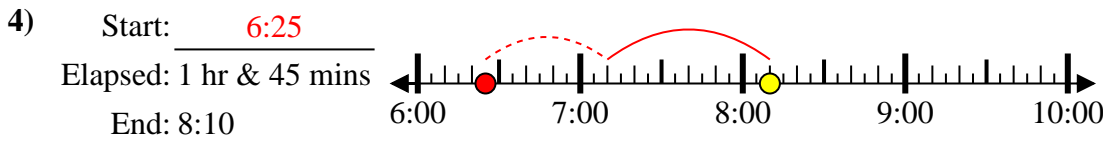
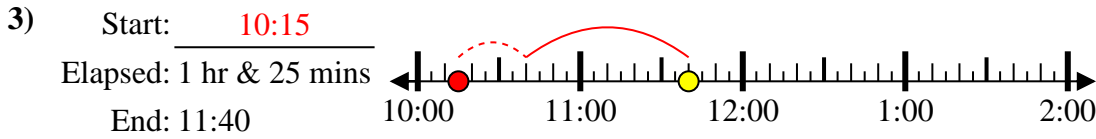
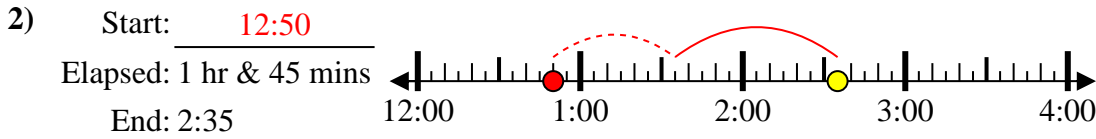
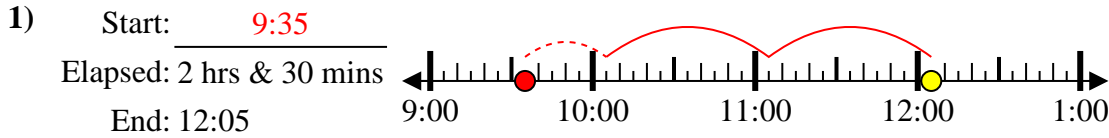
7. _____

8) Start: _____
 Elapsed: 1 hr & 40 mins
 End: 5:15

8. _____



Solve each problem.



Answers

1. 9:35

2. 12:50

3. 10:15

4. 6:25

5. 9:10

6. 11:45

7. 12:20

8. 3:35