



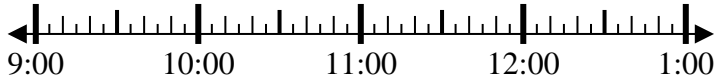
Solve each problem.

Answers

1) Start: _____

Elapsed: 1 hr & 15 mins

End: 10:45

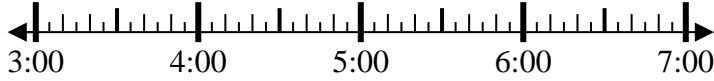


1. _____

2) Start: _____

Elapsed: 1 hr & 35 mins

End: 4:40

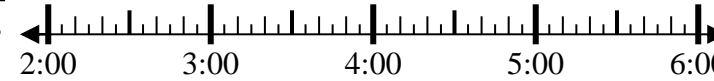


2. _____

3) Start: _____

Elapsed: 2 hrs & 30 mins

End: 5:05

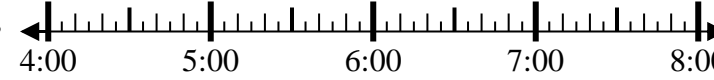


3. _____

4) Start: _____

Elapsed: 2 hrs & 35 mins

End: 7:20



4. _____

5) Start: _____

Elapsed: 1 hr & 15 mins

End: 2:30

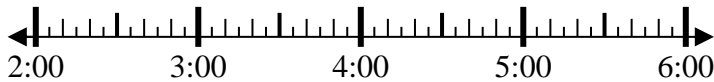


5. _____

6) Start: _____

Elapsed: 1 hr & 10 mins

End: 3:15

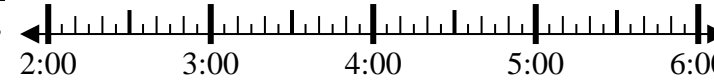


6. _____

7) Start: _____

Elapsed: 2 hrs & 30 mins

End: 4:50



7. _____

8) Start: _____

Elapsed: 1 hr & 45 mins

End: 6:15

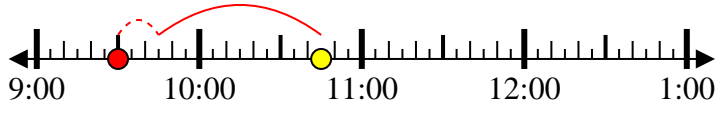


8. _____

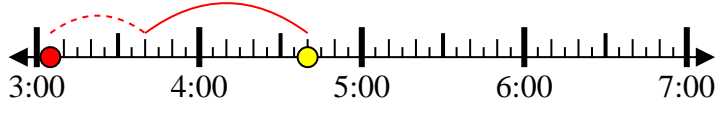


Solve each problem.

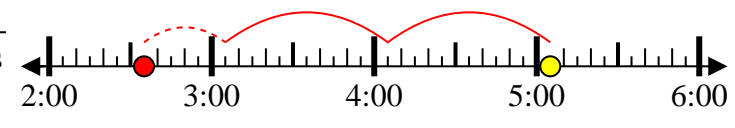
1) Start: 9:30
 Elapsed: 1 hr & 15 mins
 End: 10:45



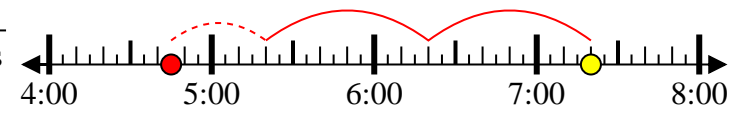
2) Start: 3:05
 Elapsed: 1 hr & 35 mins
 End: 4:40



3) Start: 2:35
 Elapsed: 2 hrs & 30 mins
 End: 5:05



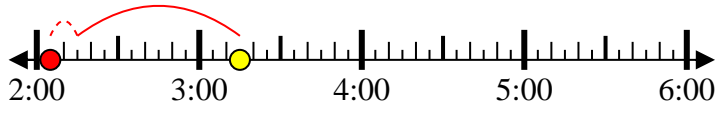
4) Start: 4:45
 Elapsed: 2 hrs & 35 mins
 End: 7:20



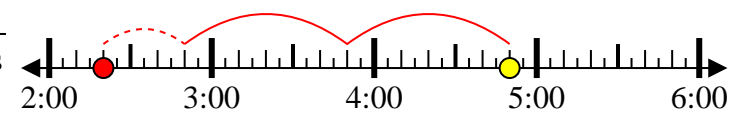
5) Start: 1:15
 Elapsed: 1 hr & 15 mins
 End: 2:30



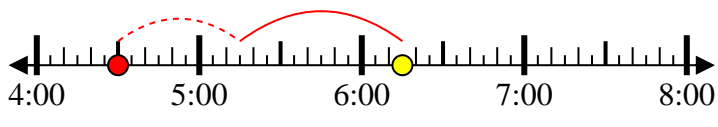
6) Start: 2:05
 Elapsed: 1 hr & 10 mins
 End: 3:15



7) Start: 2:20
 Elapsed: 2 hrs & 30 mins
 End: 4:50



8) Start: 4:30
 Elapsed: 1 hr & 45 mins
 End: 6:15



Answers

1. 9:30

2. 3:05

3. 2:35

4. 4:45

5. 1:15

6. 2:05

7. 2:20

8. 4:30