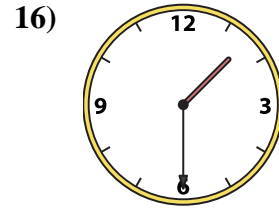
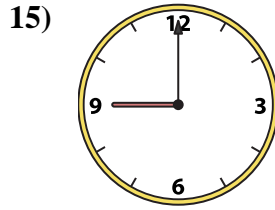
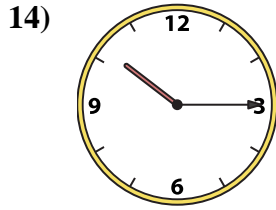
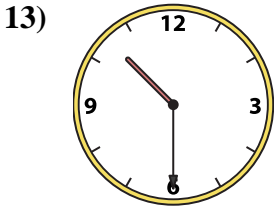
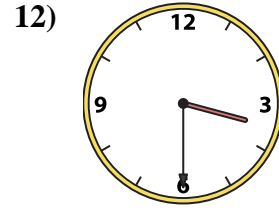
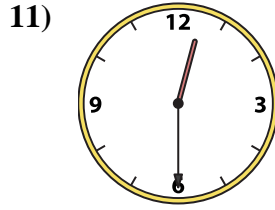
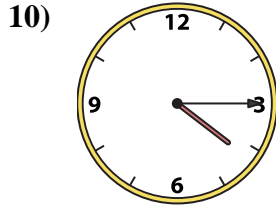
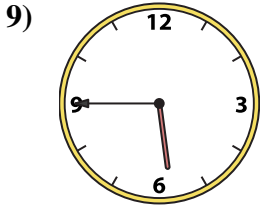
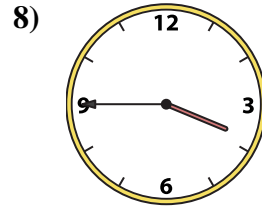
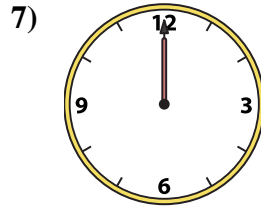
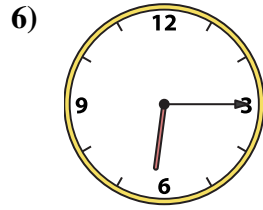

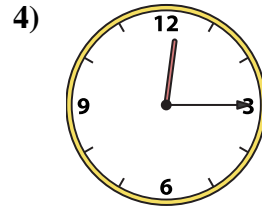
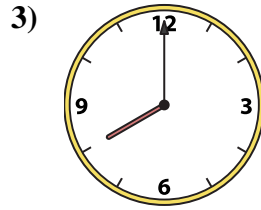
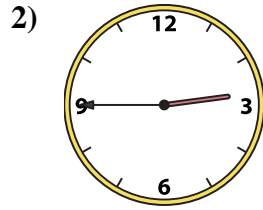
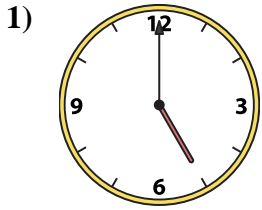




Match the analog clock to the digital clock.

Answers



1. _____
2. _____
3. _____
4. _____
5. _____
6. _____
7. _____
8. _____
9. _____
10. _____
11. _____
12. _____
13. _____
14. _____
15. _____
16. _____

A. 12:00

B. 4:15

C. 8:00

D. 9:00

E. 1:30

F. 12:30

G. 3:30

H. 2:45

I. 3:45

J. 10:15

K. 5:45

L. 6:15

M. 12:15

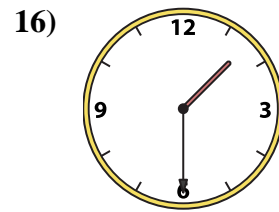
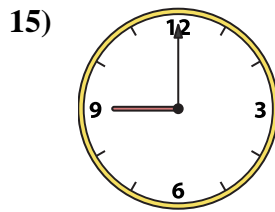
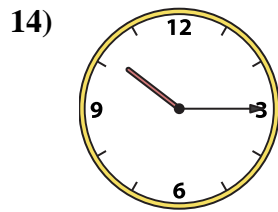
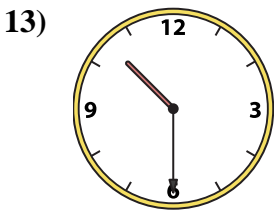
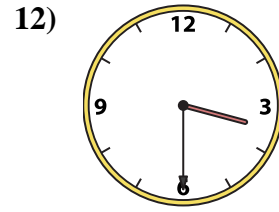
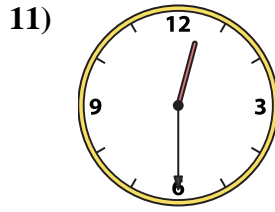
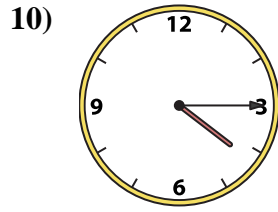
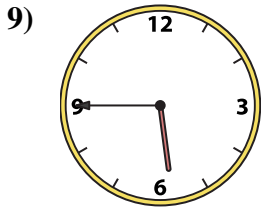
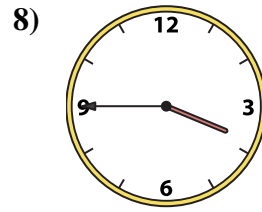
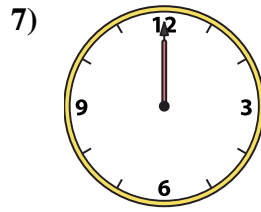
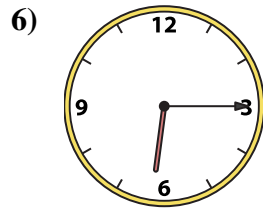

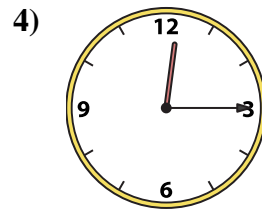
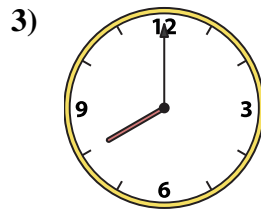
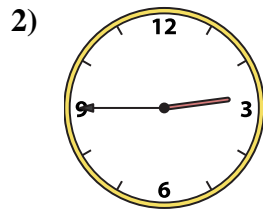
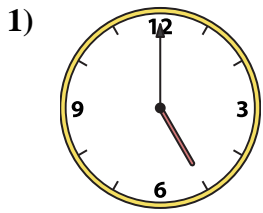
N. 10:00

O. 10:30

P. 5:00



Match the analog clock to the digital clock.



A. **12:00**

B. **4:15**

C. **8:00**

D. **9:00**

E. **1:30**

F. **12:30**

G. **3:30**

H. **2:45**

I. **3:45**

J. **10:15**

K. **5:45**

L. **6:15**

M. **12:15**

N. **10:00**

O. **10:30**

P. **5:00**

Answers

1. **P**

2. **H**

3. **C**

4. **M**

5. **N**

6. **L**

7. **A**

8. **I**

9. **K**

10. **B**

11. **F**

12. **G**

13. **O**

14. **J**

15. **D**

16. **E**