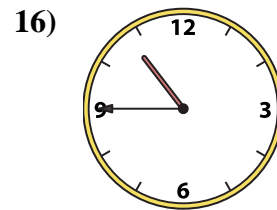
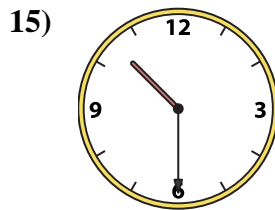
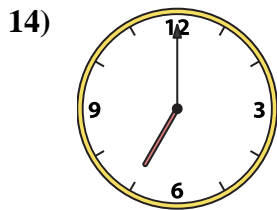
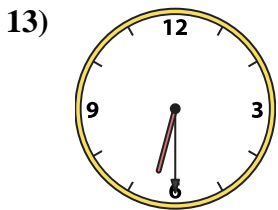
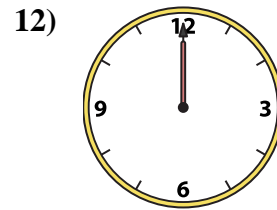
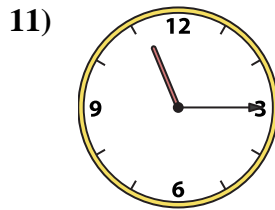
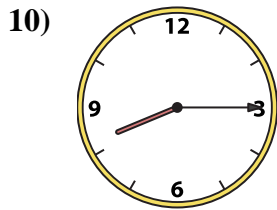
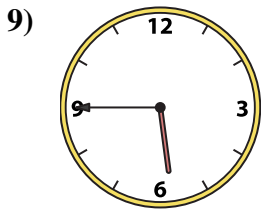
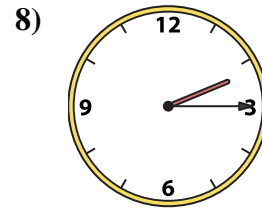
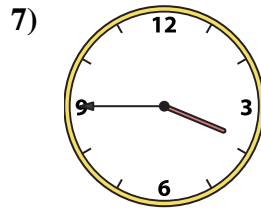
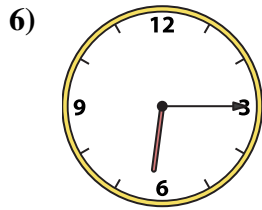
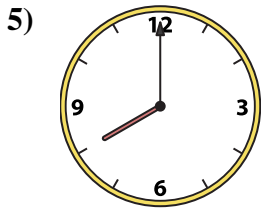
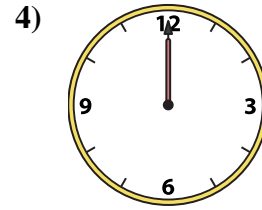
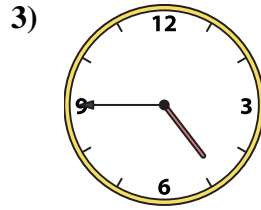
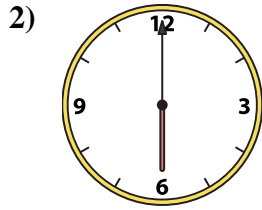
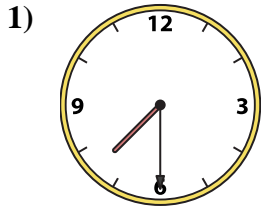




Match the analog clock to the digital clock.



A. 8:00

B. 12:00

C. 3:45

D. 10:45

E. 6:30

F. 6:00

G. 10:30

H. 7:00

I. 12:00

J. 11:15

K. 4:45

L. 7:30

M. 5:45

N. 8:15

O. 6:15

P. 2:15

**Answers**

1. \_\_\_\_\_

2. \_\_\_\_\_

3. \_\_\_\_\_

4. \_\_\_\_\_

5. \_\_\_\_\_

6. \_\_\_\_\_

7. \_\_\_\_\_

8. \_\_\_\_\_

9. \_\_\_\_\_

10. \_\_\_\_\_

11. \_\_\_\_\_

12. \_\_\_\_\_

13. \_\_\_\_\_

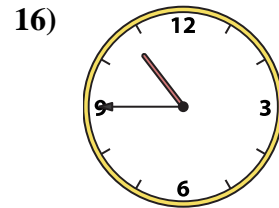
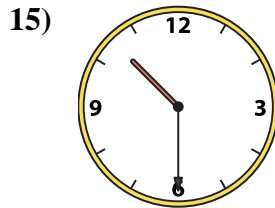
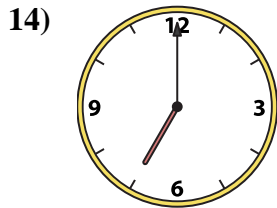
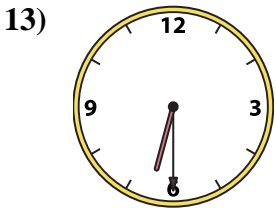
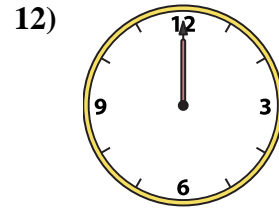
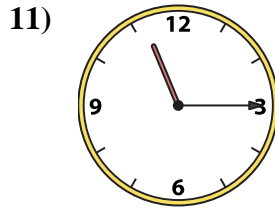
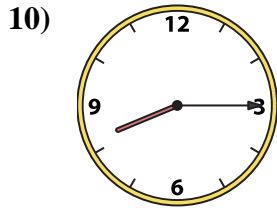
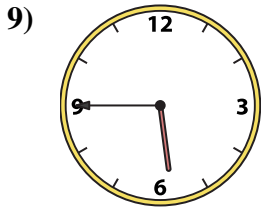
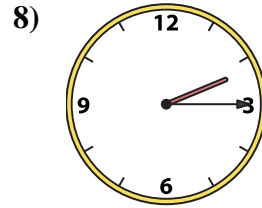
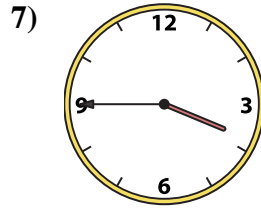
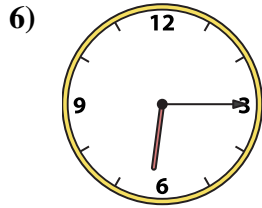

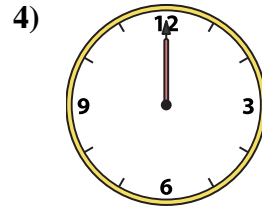
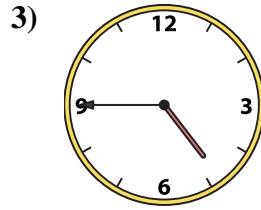
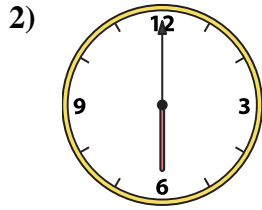
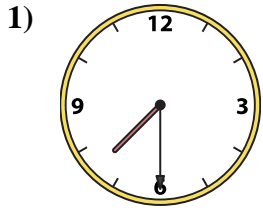
14. \_\_\_\_\_

15. \_\_\_\_\_

16. \_\_\_\_\_



Match the analog clock to the digital clock.



A. 8:00

B. 12:00

C. 3:45

D. 10:45

E. 6:30

F. 6:00

G. 10:30

H. 7:00

I. 12:00

J. 11:15

K. 4:45

L. 7:30

M. 5:45

N. 8:15

O. 6:15

P. 2:15

**Answers**

1. **L**

2. **F**

3. **K**

4. **B**

5. **A**

6. **O**

7. **C**

8. **P**

9. **M**

10. **N**

11. **J**

12. **I**

13. **E**

14. **H**

15. **G**

16. **D**