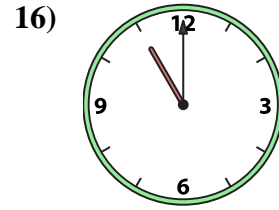
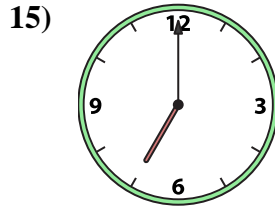
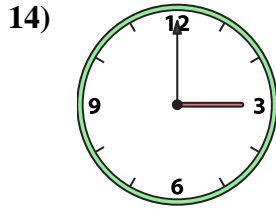
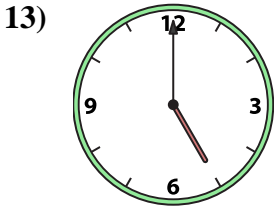
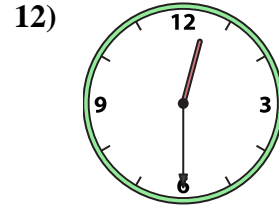
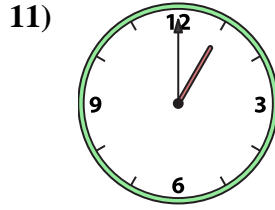
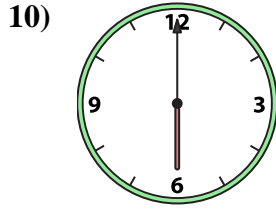
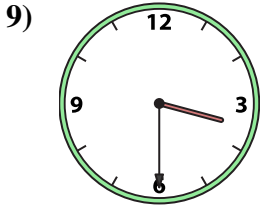
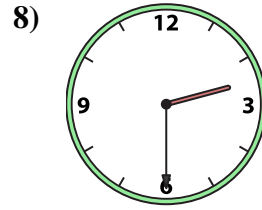
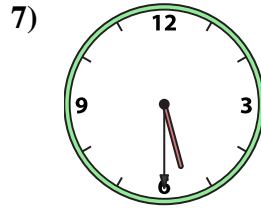
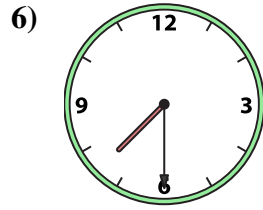
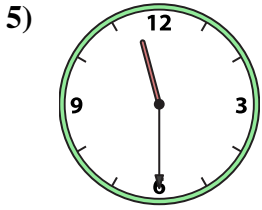
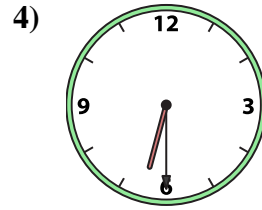
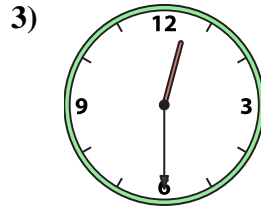
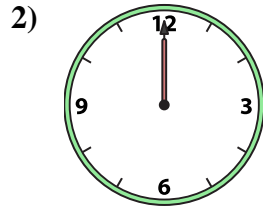
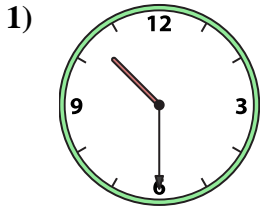




Match the analog clock to the digital clock.

Answers



1. _____
2. _____
3. _____
4. _____
5. _____
6. _____
7. _____
8. _____
9. _____
10. _____
11. _____
12. _____
13. _____
14. _____
15. _____
16. _____

A.

B.

C.

D.

E.

F.

G.

H.

I.

J.

K.

L.

M.

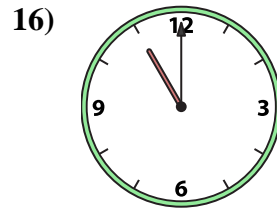
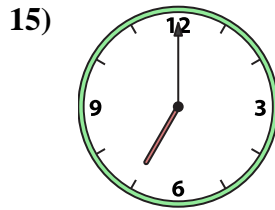
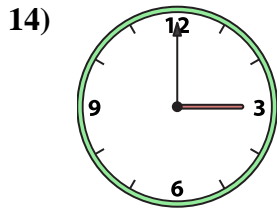
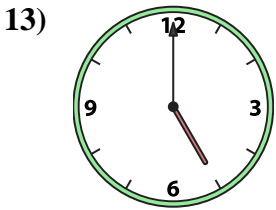
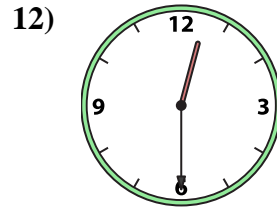
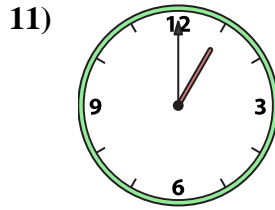
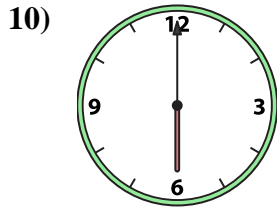
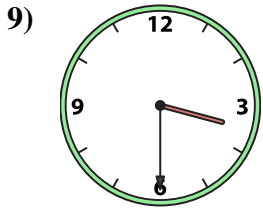
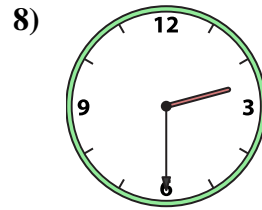
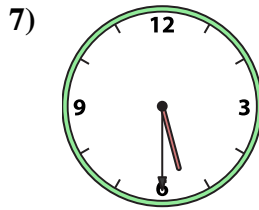
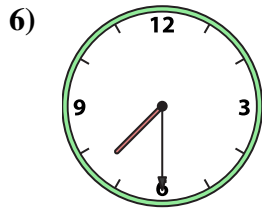
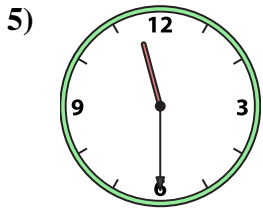
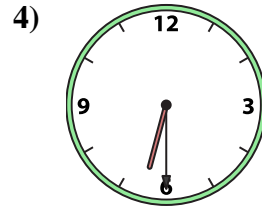
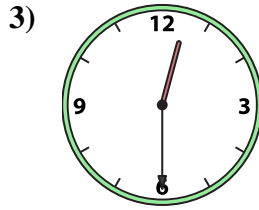
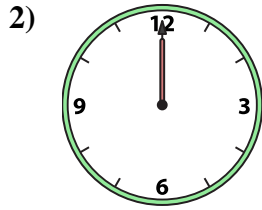
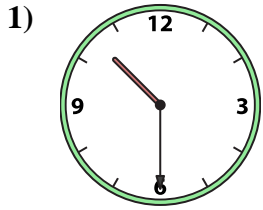
N.

O.

P.



Match the analog clock to the digital clock.



A. **2:30**

B. **10:30**

C. **7:30**

D. **6:00**

E. **3:00**

F. **5:30**

G. **1:00**

H. **5:00**

I. **7:00**

J. **12:30**

K. **11:00**

L. **6:30**

M. **12:30**

N. **11:30**

O. **3:30**

P. **12:00**

Answers

1. **B**

2. **P**

3. **J**

4. **L**

5. **N**

6. **C**

7. **F**

8. **A**

9. **O**

10. **D**

11. **G**

12. **M**

13. **H**

14. **E**

15. **I**

16. **K**