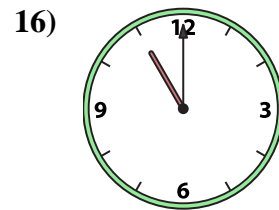
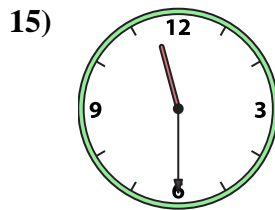
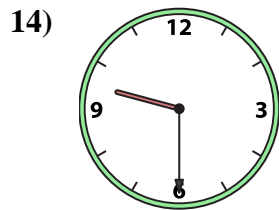
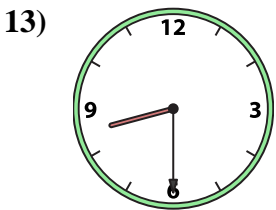
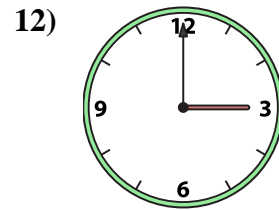
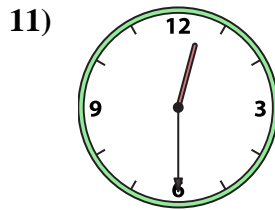
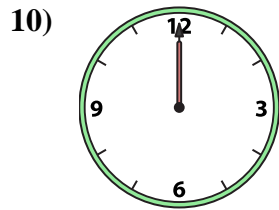
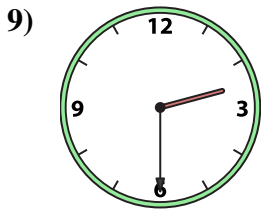
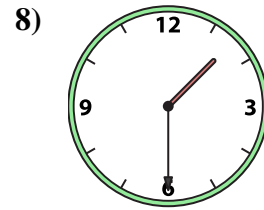
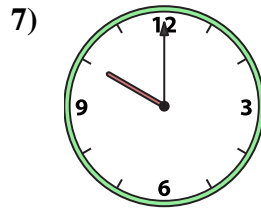
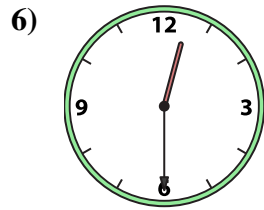
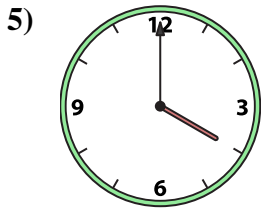
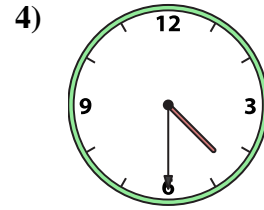
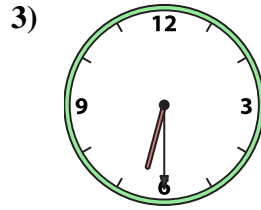
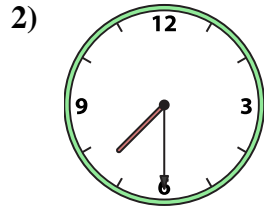
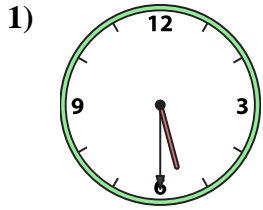




Match the analog clock to the digital clock.



A. 3:00

B. 8:30

C. 1:30

D. 12:30

E. 12:00

F. 4:30

G. 12:30

H. 7:30

I. 10:00

J. 4:00

K. 2:30

L. 6:30

M. 5:30

N. 11:30

O. 11:00

P. 9:30

Answers

1. _____

2. _____

3. _____

4. _____

5. _____

6. _____

7. _____

8. _____

9. _____

10. _____

11. _____

12. _____

13. _____

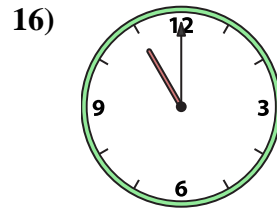
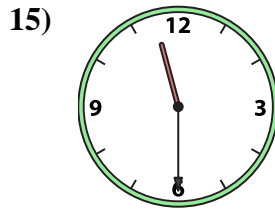
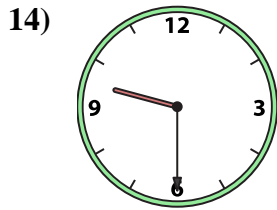
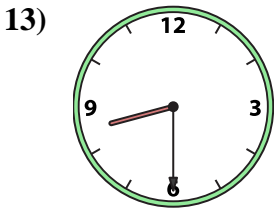
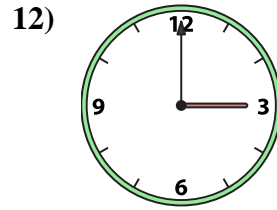
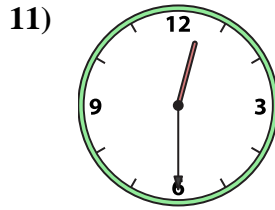
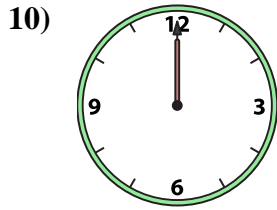
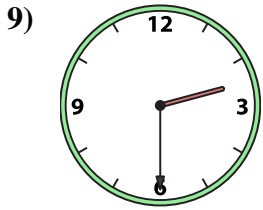
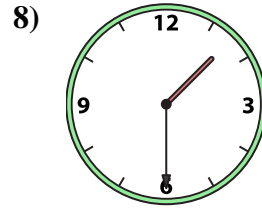
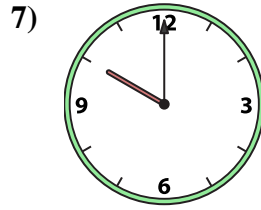
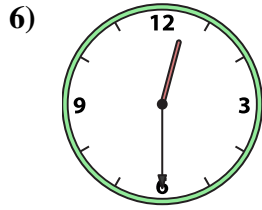
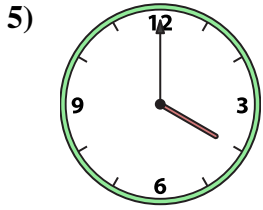
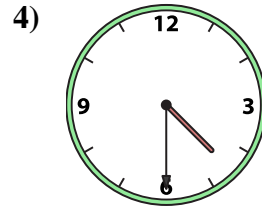
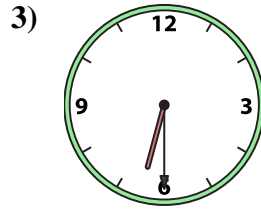
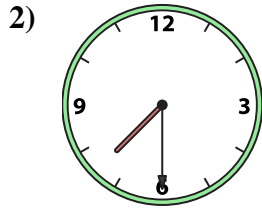
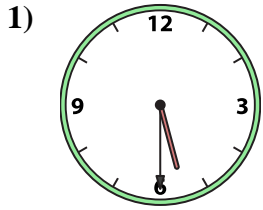
14. _____

15. _____

16. _____



Match the analog clock to the digital clock.



A. **3:00**

B. **8:30**

C. **1:30**

D. **12:30**

E. **12:00**

F. **4:30**

G. **12:30**

H. **7:30**

I. **10:00**

J. **4:00**

K. **2:30**

L. **6:30**

M. **5:30**

N. **11:30**

O. **11:00**

P. **9:30**

Answers

1. **M**

2. **H**

3. **L**

4. **F**

5. **J**

6. **D**

7. **I**

8. **C**

9. **K**

10. **E**

11. **G**

12. **A**

13. **B**

14. **P**

15. **N**

16. **O**