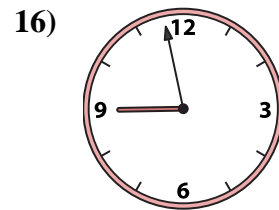
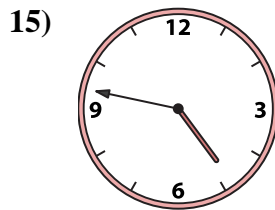
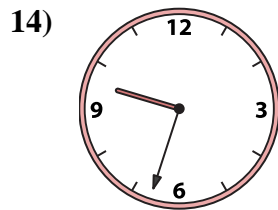
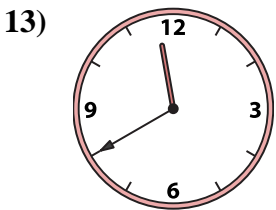
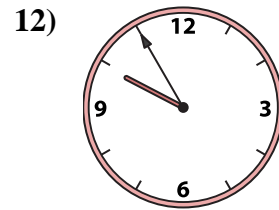
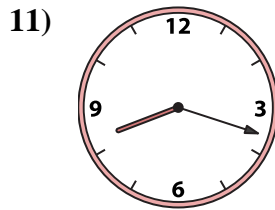
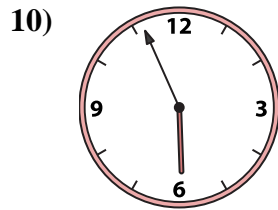
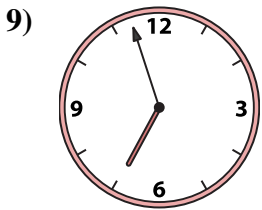
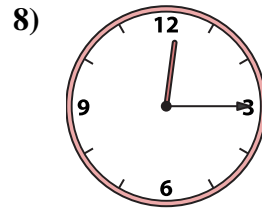
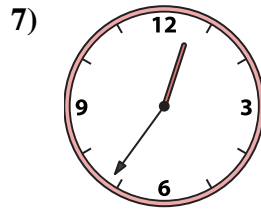
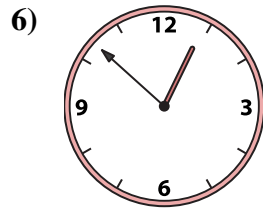

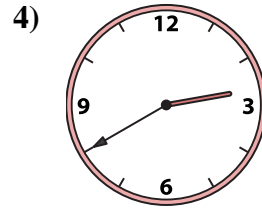
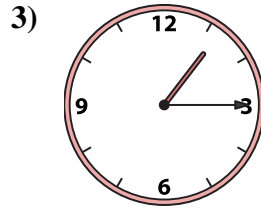
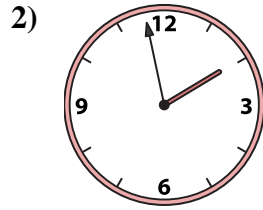
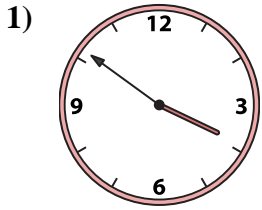




Match the analog clock to the digital clock.

**Answers**



A. 9:55

B. 5:56

C. 4:47

D. 11:40

E. 3:51

F. 1:58

G. 8:18

H. 1:15

I. 6:57

J. 8:58

K. 9:33

L. 12:52

M. 11:55

N. 12:15

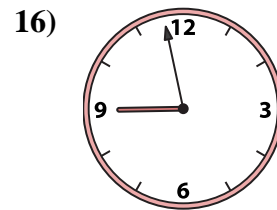
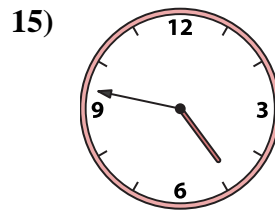
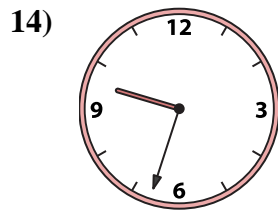
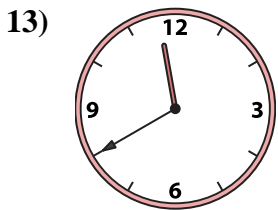
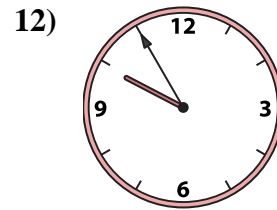
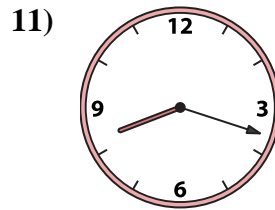
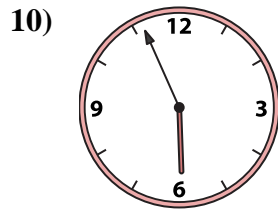
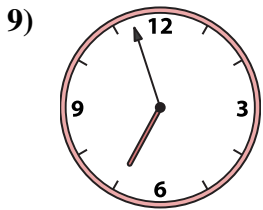
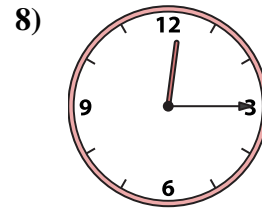
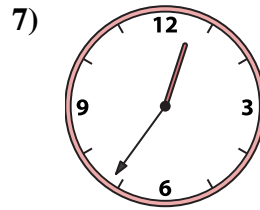
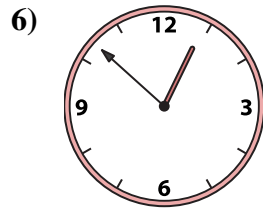
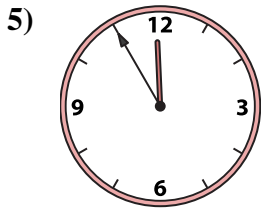
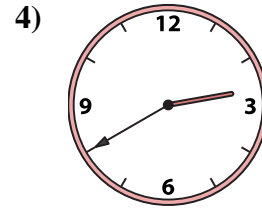
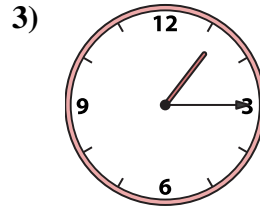
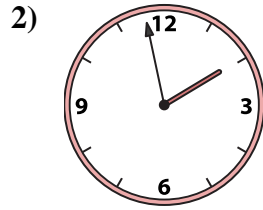
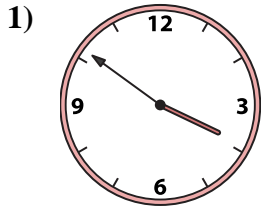
O. 12:36

P. 2:40

1. \_\_\_\_\_
2. \_\_\_\_\_
3. \_\_\_\_\_
4. \_\_\_\_\_
5. \_\_\_\_\_
6. \_\_\_\_\_
7. \_\_\_\_\_
8. \_\_\_\_\_
9. \_\_\_\_\_
10. \_\_\_\_\_
11. \_\_\_\_\_
12. \_\_\_\_\_
13. \_\_\_\_\_
14. \_\_\_\_\_
15. \_\_\_\_\_
16. \_\_\_\_\_



Match the analog clock to the digital clock.



A. **9:55**

B. **5:56**

C. **4:47**

D. **11:40**

E. **3:51**

F. **1:58**

G. **8:18**

H. **1:15**

I. **6:57**

J. **8:58**

K. **9:33**

L. **12:52**

M. **11:55**

N. **12:15**

O. **12:36**

P. **2:40**

**Answers**

1. **E**

2. **F**

3. **H**

4. **P**

5. **M**

6. **L**

7. **O**

8. **N**

9. **I**

10. **B**

11. **G**

12. **A**

13. **D**

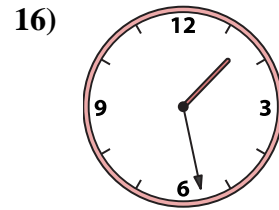
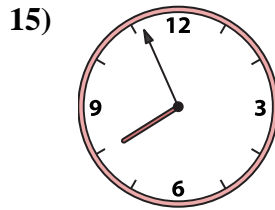
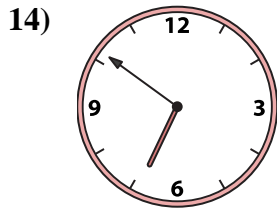
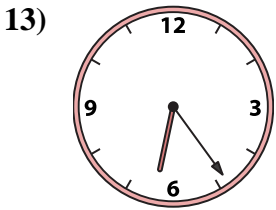
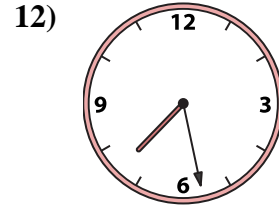
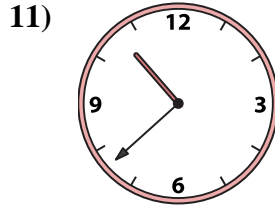
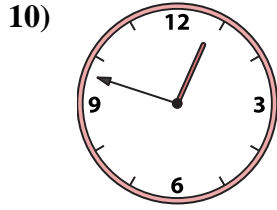
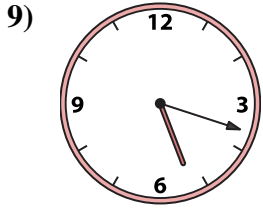
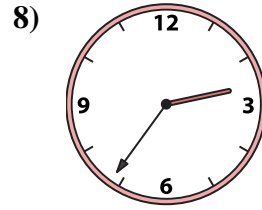
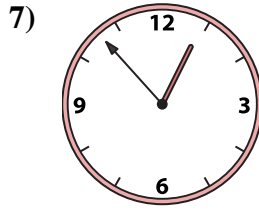
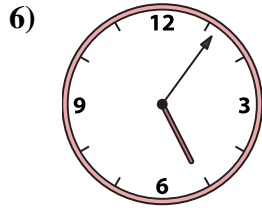
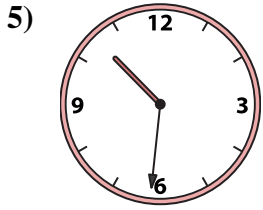
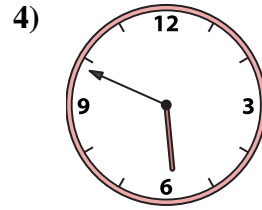
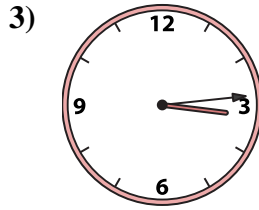

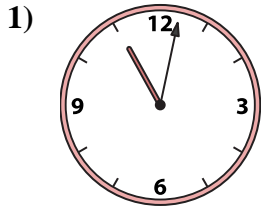
14. **K**

15. **C**

16. **J**



Match the analog clock to the digital clock.



**Answers**

1. \_\_\_\_\_
2. \_\_\_\_\_
3. \_\_\_\_\_
4. \_\_\_\_\_
5. \_\_\_\_\_
6. \_\_\_\_\_
7. \_\_\_\_\_
8. \_\_\_\_\_
9. \_\_\_\_\_
10. \_\_\_\_\_
11. \_\_\_\_\_
12. \_\_\_\_\_
13. \_\_\_\_\_
14. \_\_\_\_\_
15. \_\_\_\_\_
16. \_\_\_\_\_

A. 2:56

B. 10:31

C. 7:56

D. 6:24

E. 3:14

F. 5:49

G. 2:36

H. 1:28

I. 5:06

J. 10:38

K. 7:28

L. 12:53

M. 5:18

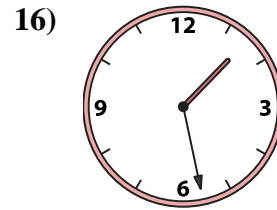
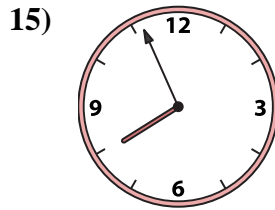
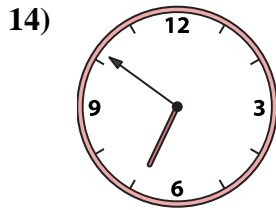
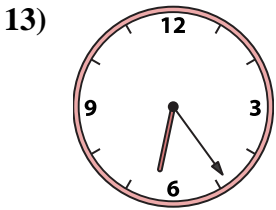
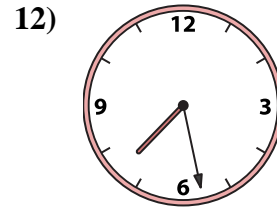
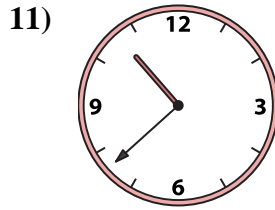
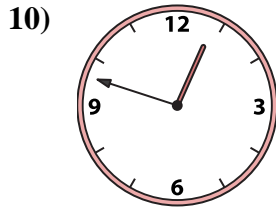
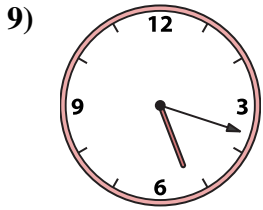
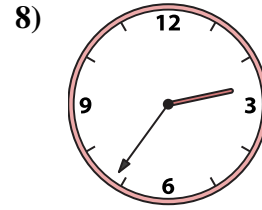
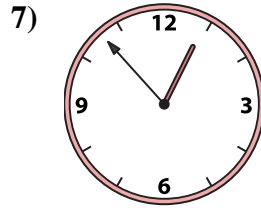
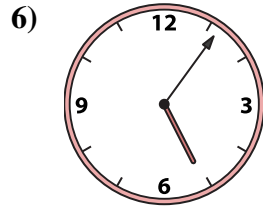
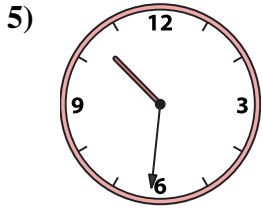
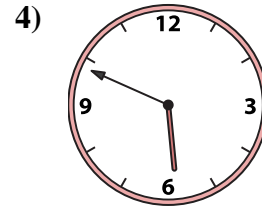
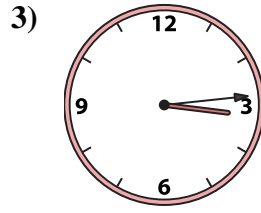
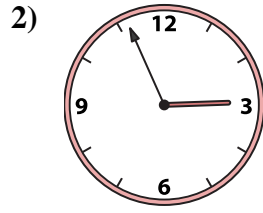
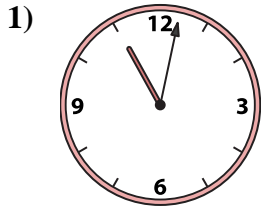
N. 12:48

O. 11:02

P. 6:51



Match the analog clock to the digital clock.



A. **2:56**

B. **10:31**

C. **7:56**

D. **6:24**

E. **3:14**

F. **5:49**

G. **2:36**

H. **1:28**

I. **5:06**

J. **10:38**

K. **7:28**

L. **12:53**

M. **5:18**

N. **12:48**

O. **11:02**

P. **6:51**

**Answers**

1. **O**

2. **A**

3. **E**

4. **F**

5. **B**

6. **I**

7. **L**

8. **G**

9. **M**

10. **N**

11. **J**

12. **K**

13. **D**

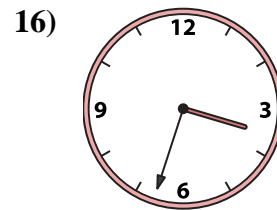
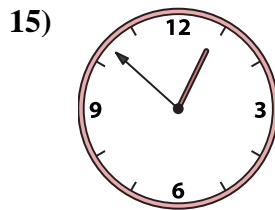
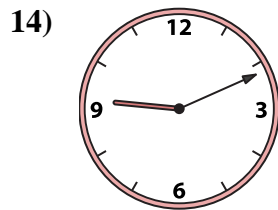
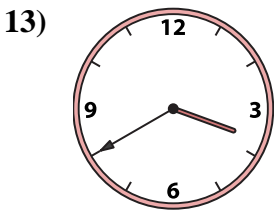
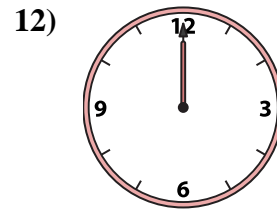
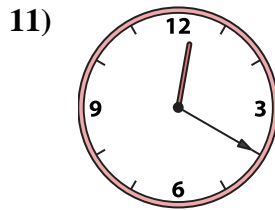
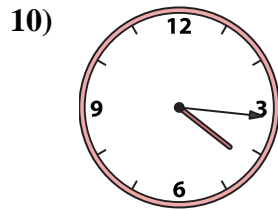
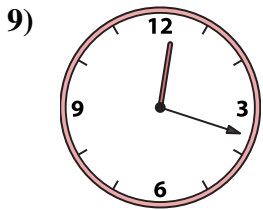
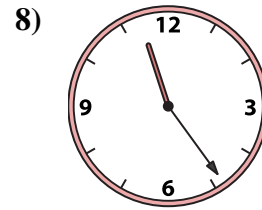
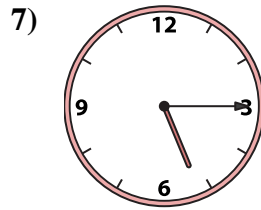
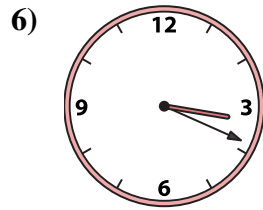
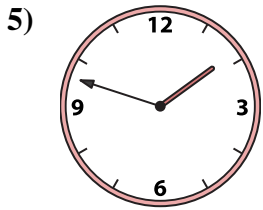
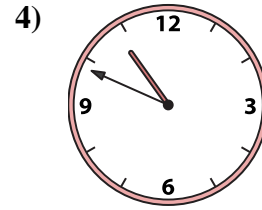
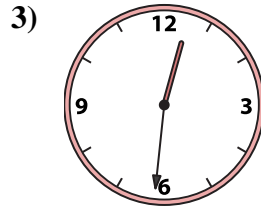
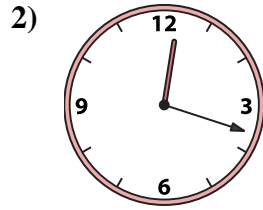
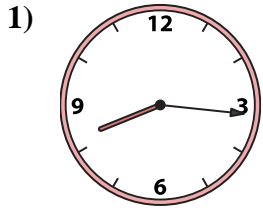
14. **P**

15. **C**

16. **H**



Match the analog clock to the digital clock.



**Answers**

1. \_\_\_\_\_
2. \_\_\_\_\_
3. \_\_\_\_\_
4. \_\_\_\_\_
5. \_\_\_\_\_
6. \_\_\_\_\_
7. \_\_\_\_\_
8. \_\_\_\_\_
9. \_\_\_\_\_
10. \_\_\_\_\_
11. \_\_\_\_\_
12. \_\_\_\_\_
13. \_\_\_\_\_
14. \_\_\_\_\_
15. \_\_\_\_\_
16. \_\_\_\_\_

A. 3:40

B. 9:11

C. 12:20

D. 12:18

E. 12:00

F. 12:18

G. 10:49

H. 12:52

I. 8:16

J. 11:24

K. 5:15

L. 1:48

M. 12:31

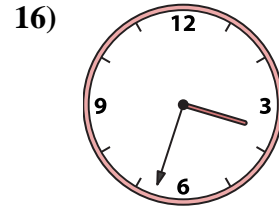
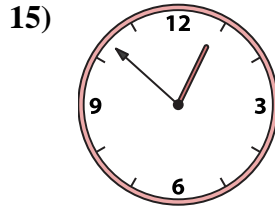
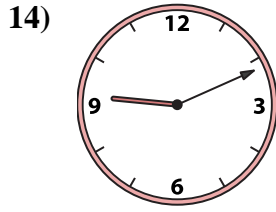
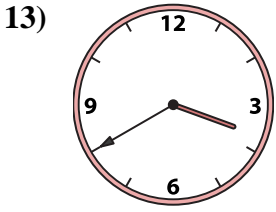
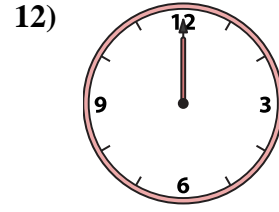
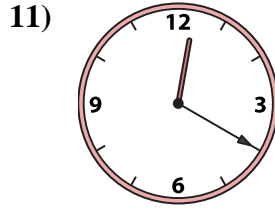
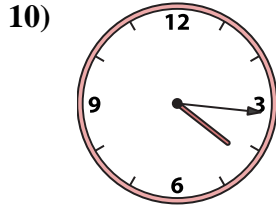
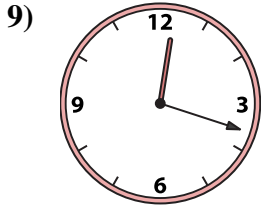
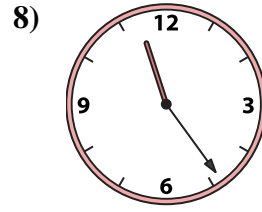
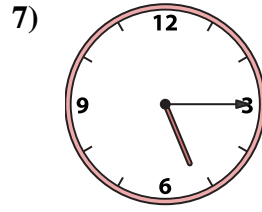
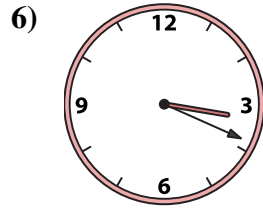
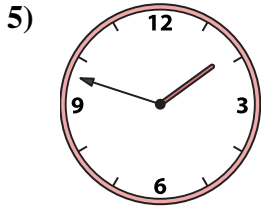
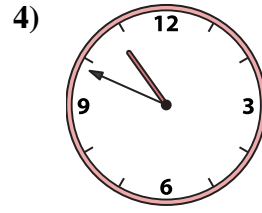
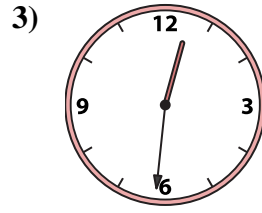
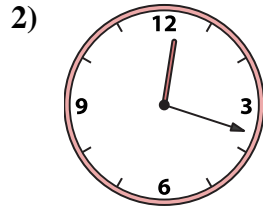
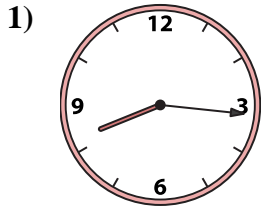
N. 4:16

O. 3:33

P. 3:19



Match the analog clock to the digital clock.



A. **3:40**

B. **9:11**

C. **12:20**

D. **12:18**

E. **12:00**

F. **12:18**

G. **10:49**

H. **12:52**

I. **8:16**

J. **11:24**

K. **5:15**

L. **1:48**

M. **12:31**

N. **4:16**

O. **3:33**

P. **3:19**

**Answers**

1. **I**

2. **D**

3. **M**

4. **G**

5. **L**

6. **P**

7. **K**

8. **J**

9. **F**

10. **N**

11. **C**

12. **E**

13. **A**

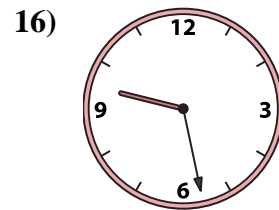
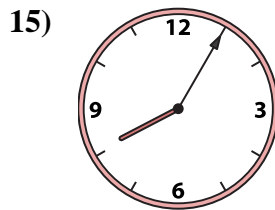
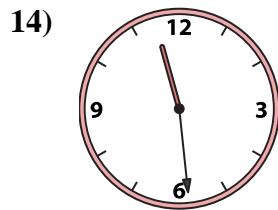
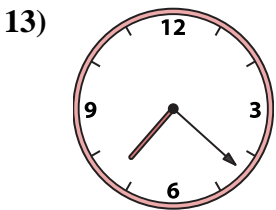
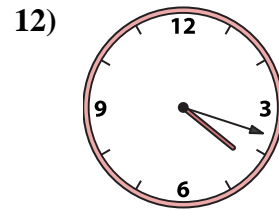
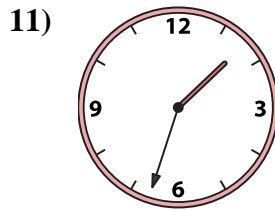
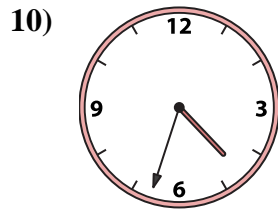
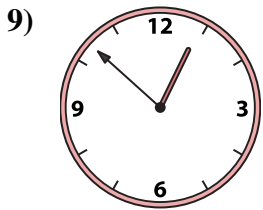
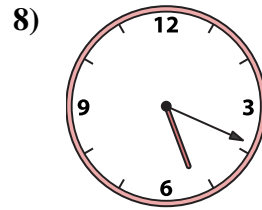
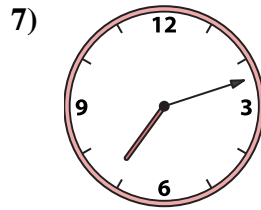
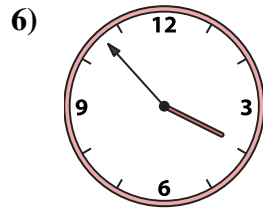
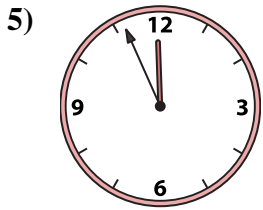
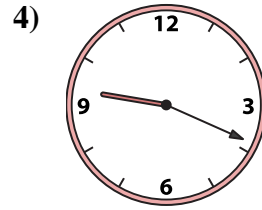
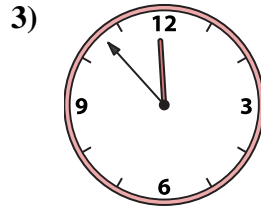
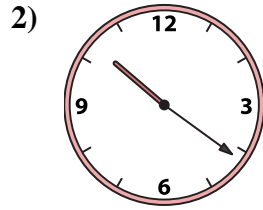
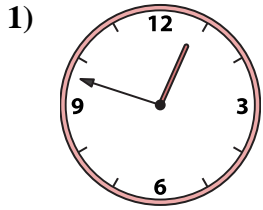
14. **B**

15. **H**

16. **O**



Match the analog clock to the digital clock.



**Answers**

1. \_\_\_\_\_
2. \_\_\_\_\_
3. \_\_\_\_\_
4. \_\_\_\_\_
5. \_\_\_\_\_
6. \_\_\_\_\_
7. \_\_\_\_\_
8. \_\_\_\_\_
9. \_\_\_\_\_
10. \_\_\_\_\_
11. \_\_\_\_\_
12. \_\_\_\_\_
13. \_\_\_\_\_
14. \_\_\_\_\_
15. \_\_\_\_\_
16. \_\_\_\_\_

A. **11:56**

B. **9:28**

C. **11:53**

D. **3:53**

E. **12:48**

F. **1:33**

G. **11:29**

H. **7:12**

I. **4:33**

J. **5:19**

K. **7:22**

L. **10:21**

M. **9:19**

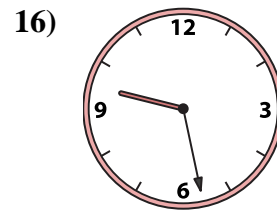
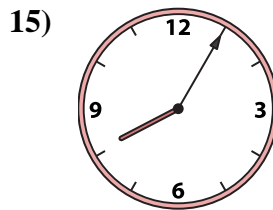
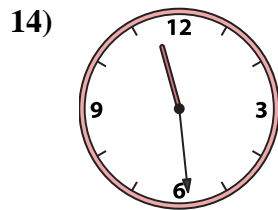
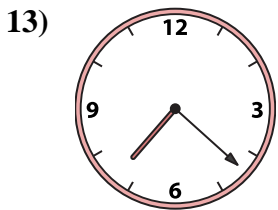
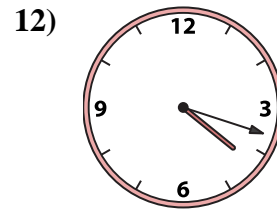
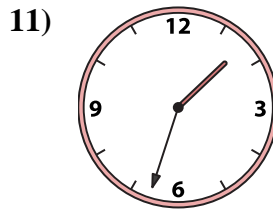
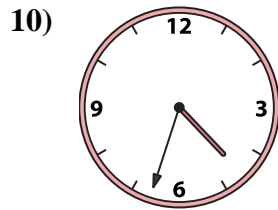
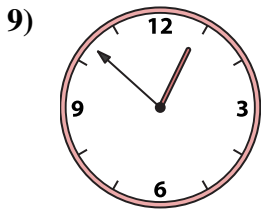
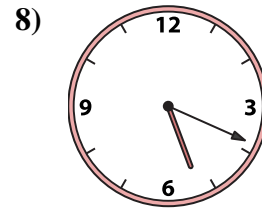
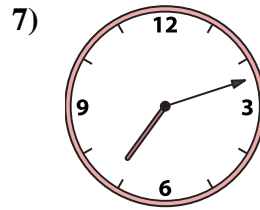
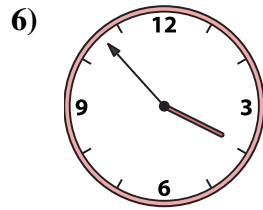
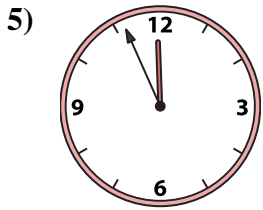
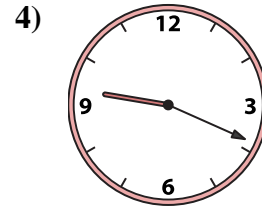

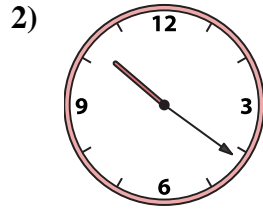
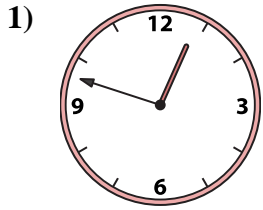
N. **12:52**

O. **4:18**

P. **8:05**



Match the analog clock to the digital clock.



A. **11:56**

B. **9:28**

C. **11:53**

D. **3:53**

E. **12:48**

F. **1:33**

G. **11:29**

H. **7:12**

I. **4:33**

J. **5:19**

K. **7:22**

L. **10:21**

M. **9:19**

N. **12:52**

O. **4:18**

P. **8:05**

**Answers**

1. **E**

2. **L**

3. **C**

4. **M**

5. **A**

6. **D**

7. **H**

8. **J**

9. **N**

10. **I**

11. **F**

12. **O**

13. **K**

14. **G**

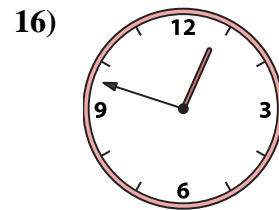
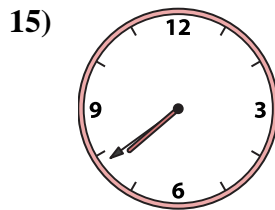
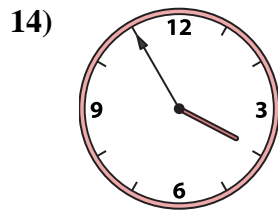
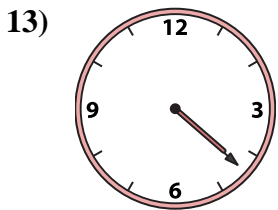
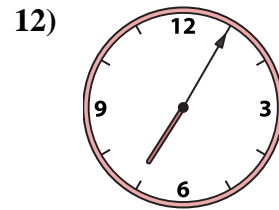
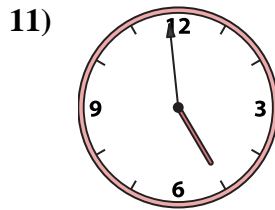
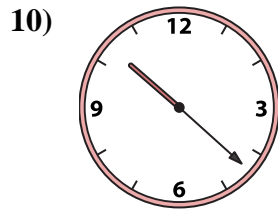
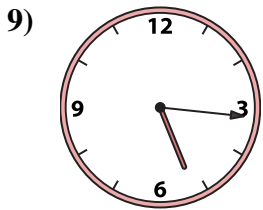
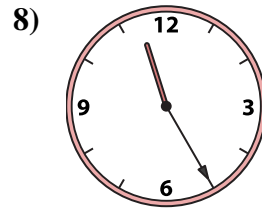
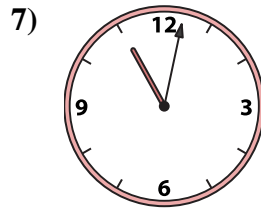
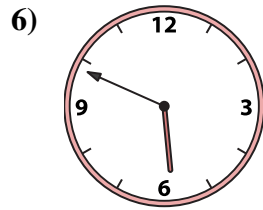
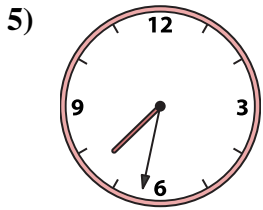
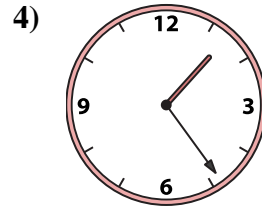
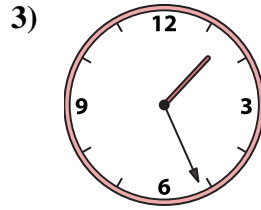
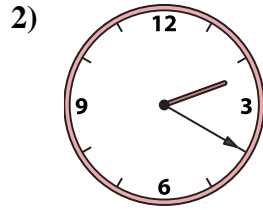

15. **P**

16. **B**





Match the analog clock to the digital clock.



A. 11:02

B. 1:24

C. 11:25

D. 5:16

E. 4:59

F. 4:22

G. 3:55

H. 5:49

I. 7:32

J. 1:01

K. 1:26

L. 12:48

M. 7:39

N. 2:20

O. 10:22

P. 7:05

**Answers**

1. \_\_\_\_\_

2. \_\_\_\_\_

3. \_\_\_\_\_

4. \_\_\_\_\_

5. \_\_\_\_\_

6. \_\_\_\_\_

7. \_\_\_\_\_

8. \_\_\_\_\_

9. \_\_\_\_\_

10. \_\_\_\_\_

11. \_\_\_\_\_

12. \_\_\_\_\_

13. \_\_\_\_\_

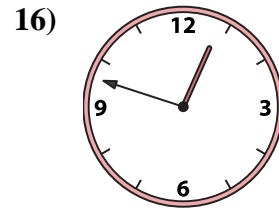
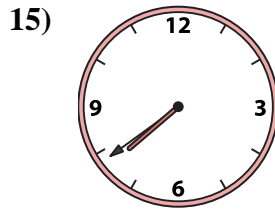
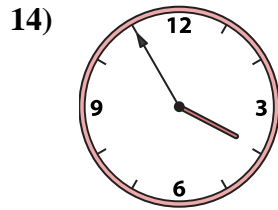
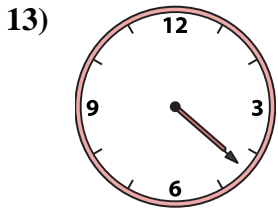
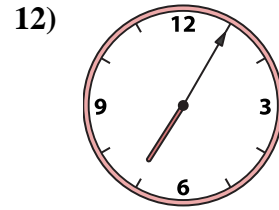
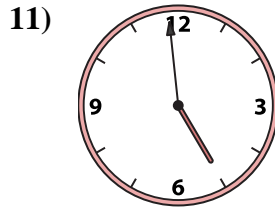
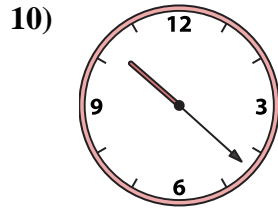
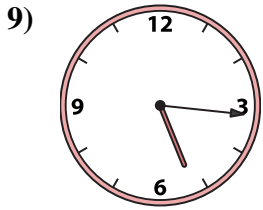
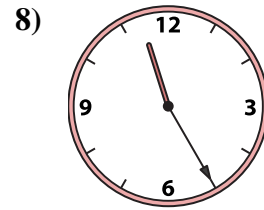
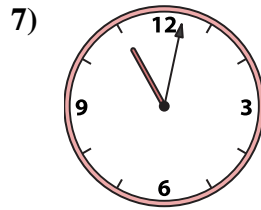
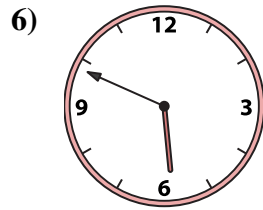
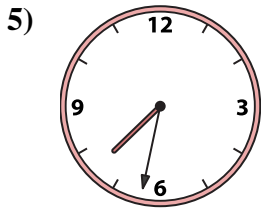
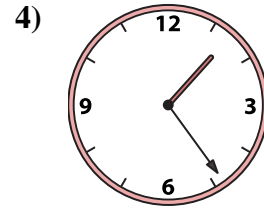
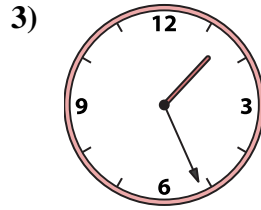
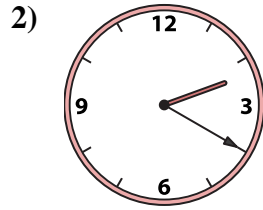

14. \_\_\_\_\_

15. \_\_\_\_\_

16. \_\_\_\_\_



Match the analog clock to the digital clock.



A. **11:02**

B. **1:24**

C. **11:25**

D. **5:16**

E. **4:59**

F. **4:22**

G. **3:55**

H. **5:49**

I. **7:32**

J. **1:01**

K. **1:26**

L. **12:48**

M. **7:39**

N. **2:20**

O. **10:22**

P. **7:05**

**Answers**

1. **J**

2. **N**

3. **K**

4. **B**

5. **I**

6. **H**

7. **A**

8. **C**

9. **D**

10. **O**

11. **E**

12. **P**

13. **F**

14. **G**

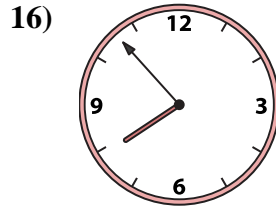
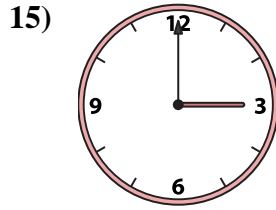
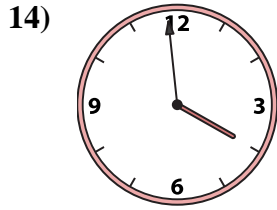
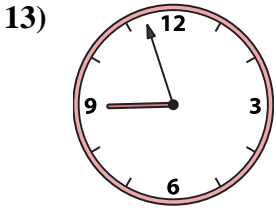
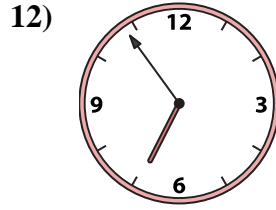
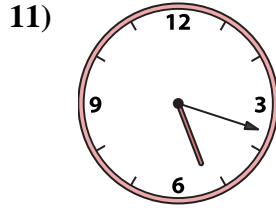
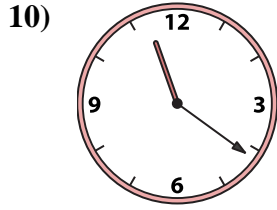

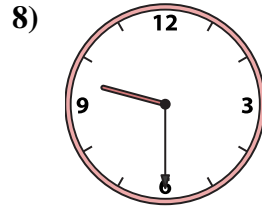
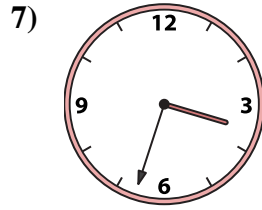

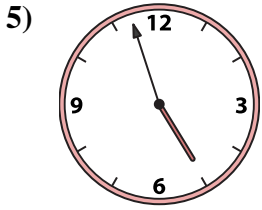
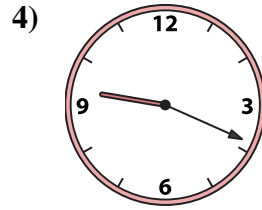
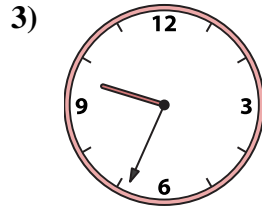
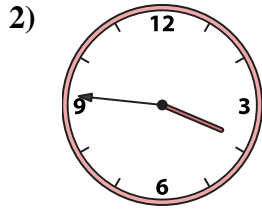
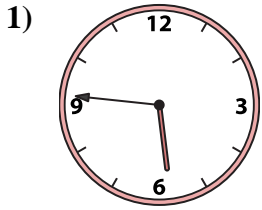
15. **M**

16. **L**



Match the analog clock to the digital clock.

**Answers**



1. \_\_\_\_\_
2. \_\_\_\_\_
3. \_\_\_\_\_
4. \_\_\_\_\_
5. \_\_\_\_\_
6. \_\_\_\_\_
7. \_\_\_\_\_
8. \_\_\_\_\_
9. \_\_\_\_\_
10. \_\_\_\_\_
11. \_\_\_\_\_
12. \_\_\_\_\_
13. \_\_\_\_\_
14. \_\_\_\_\_
15. \_\_\_\_\_
16. \_\_\_\_\_

A. 5:46

B. 3:00

C. 3:46

D. 12:08

E. 3:33

F. 6:54

G. 7:53

H. 12:01

I. 9:30

J. 3:59

K. 4:57

L. 8:57

M. 5:18

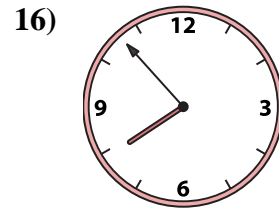
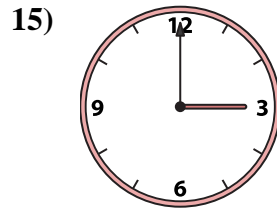
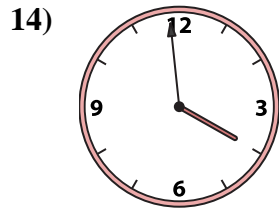
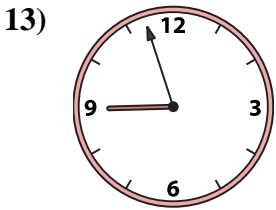
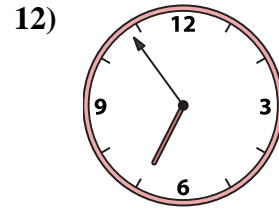
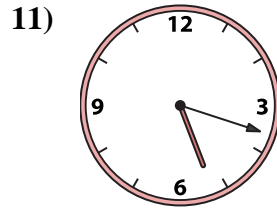
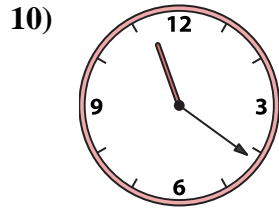

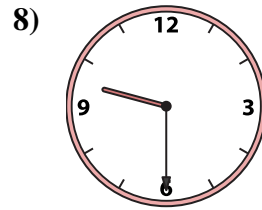
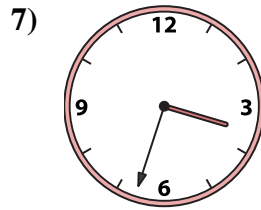

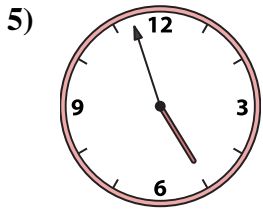
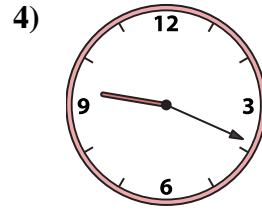
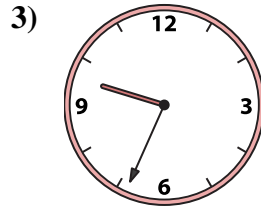
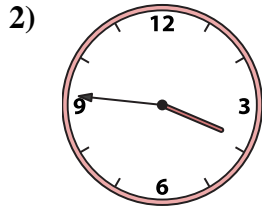
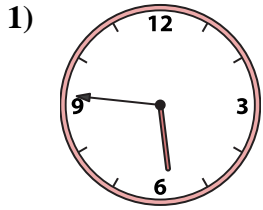
N. 9:34

O. 9:19

P. 11:21



Match the analog clock to the digital clock.



A. 5:46

B. 3:00

C. 3:46

D. 12:08

E. 3:33

F. 6:54

G. 7:53

H. 12:01

I. 9:30

J. 3:59

K. 4:57

L. 8:57

M. 5:18

N. 9:34

O. 9:19

P. 11:21

**Answers**

1. **A**

2. **C**

3. **N**

4. **O**

5. **K**

6. **D**

7. **E**

8. **I**

9. **H**

10. **P**

11. **M**

12. **F**

13. **L**

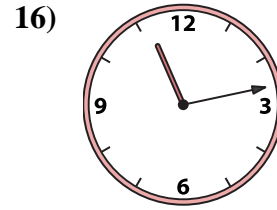
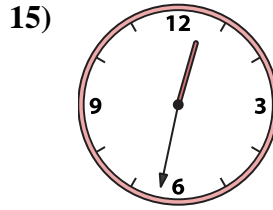
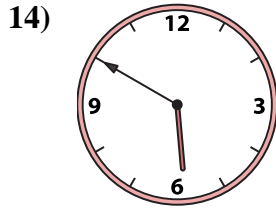
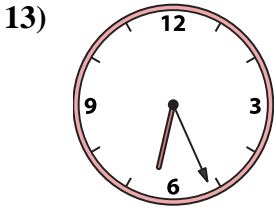
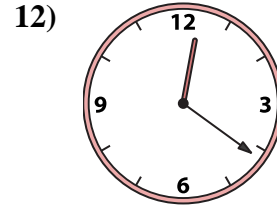
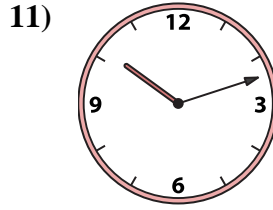
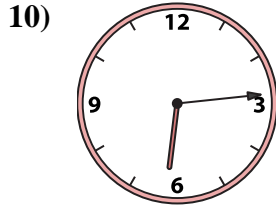
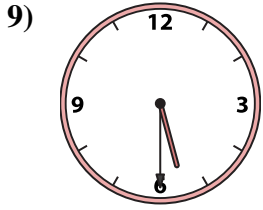
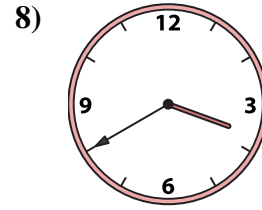
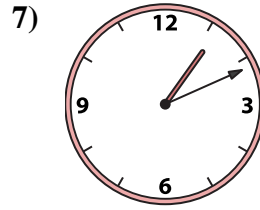
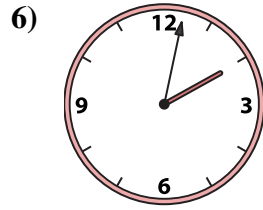
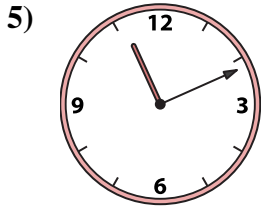
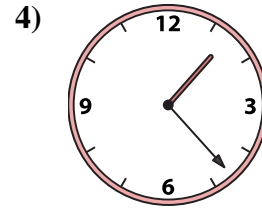
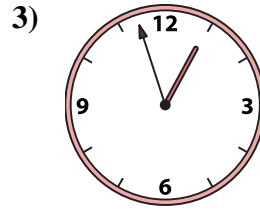
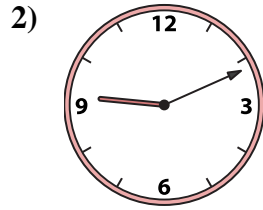
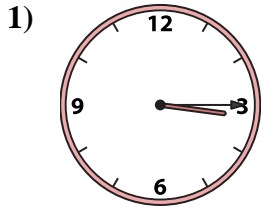
14. **J**

15. **B**

16. **G**



Match the analog clock to the digital clock.



**Answers**

1. \_\_\_\_\_
2. \_\_\_\_\_
3. \_\_\_\_\_
4. \_\_\_\_\_
5. \_\_\_\_\_
6. \_\_\_\_\_
7. \_\_\_\_\_
8. \_\_\_\_\_
9. \_\_\_\_\_
10. \_\_\_\_\_
11. \_\_\_\_\_
12. \_\_\_\_\_
13. \_\_\_\_\_
14. \_\_\_\_\_
15. \_\_\_\_\_
16. \_\_\_\_\_

A. **10:12**

B. **3:40**

C. **1:23**

D. **12:32**

E. **12:21**

F. **3:15**

G. **1:11**

H. **6:14**

I. **5:50**

J. **2:02**

K. **5:30**

L. **6:26**

M. **12:57**

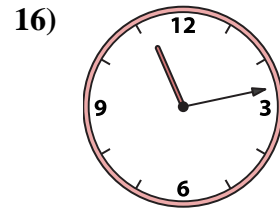
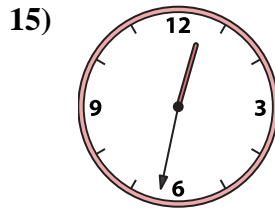
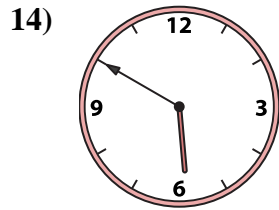
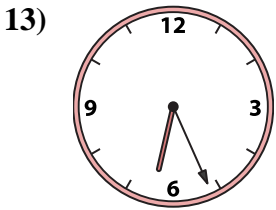
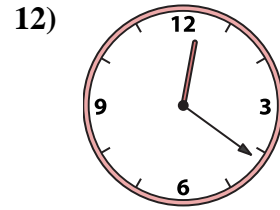
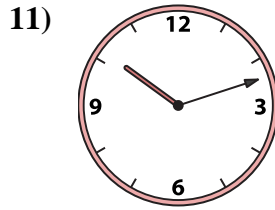
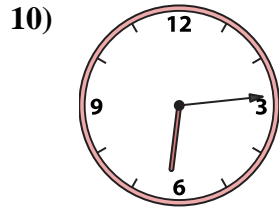
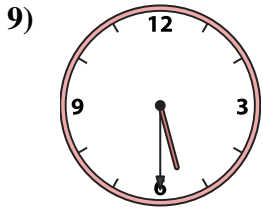
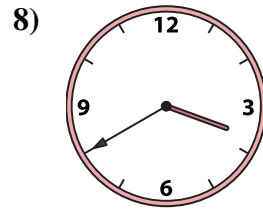
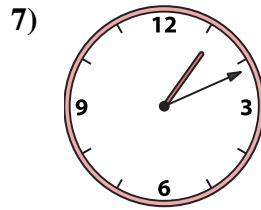
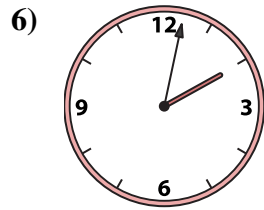
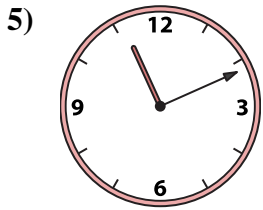
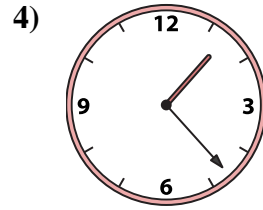
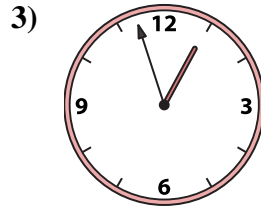
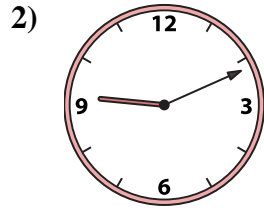
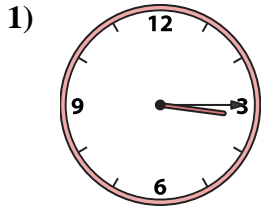
N. **11:11**

O. **11:13**

P. **9:11**



Match the analog clock to the digital clock.



A. **10:12**

B. **3:40**

C. **1:23**

D. **12:32**

E. **12:21**

F. **3:15**

G. **1:11**

H. **6:14**

I. **5:50**

J. **2:02**

K. **5:30**

L. **6:26**

M. **12:57**

N. **11:11**

O. **11:13**

P. **9:11**

**Answers**

1. **F**

2. **P**

3. **M**

4. **C**

5. **N**

6. **J**

7. **G**

8. **B**

9. **K**

10. **H**

11. **A**

12. **E**

13. **L**

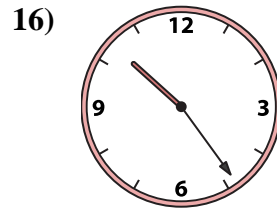
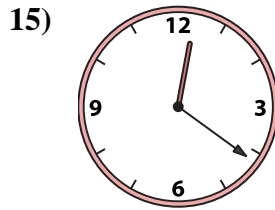
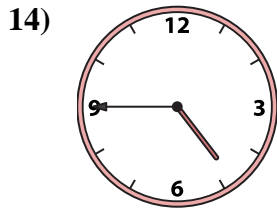
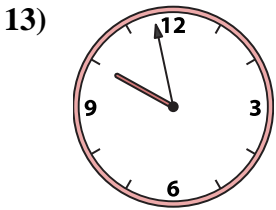
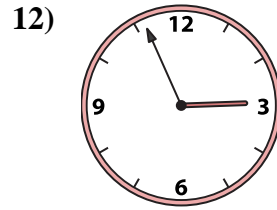
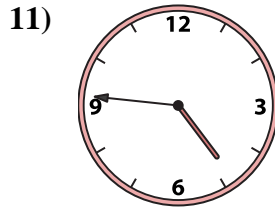
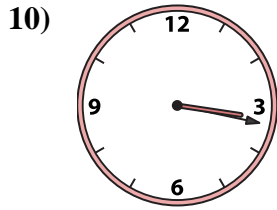
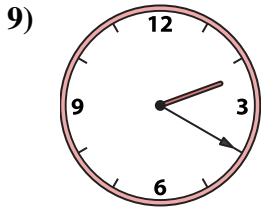
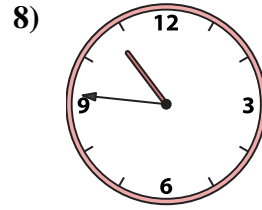
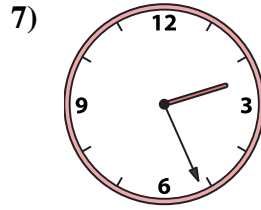
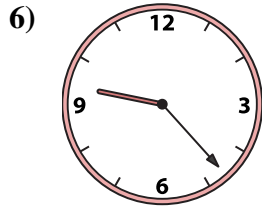
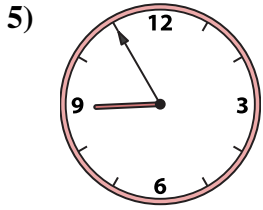
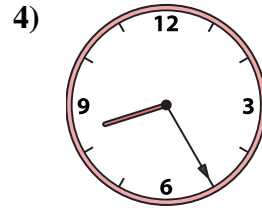
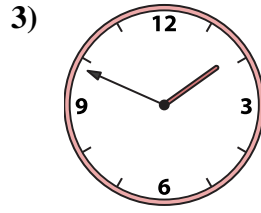
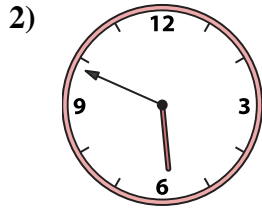
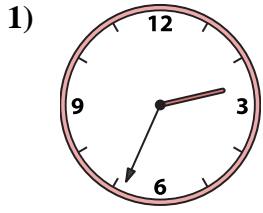
14. **I**

15. **D**

16. **O**



Match the analog clock to the digital clock.



A. 12:21

B. 8:25

C. 1:49

D. 3:17

E. 2:56

F. 4:45

G. 2:20

H. 2:26

I. 4:46

J. 10:46

K. 9:23

L. 10:24

M. 5:49

N. 2:34

O. 9:58

P. 8:55

**Answers**

1. \_\_\_\_\_

2. \_\_\_\_\_

3. \_\_\_\_\_

4. \_\_\_\_\_

5. \_\_\_\_\_

6. \_\_\_\_\_

7. \_\_\_\_\_

8. \_\_\_\_\_

9. \_\_\_\_\_

10. \_\_\_\_\_

11. \_\_\_\_\_

12. \_\_\_\_\_

13. \_\_\_\_\_

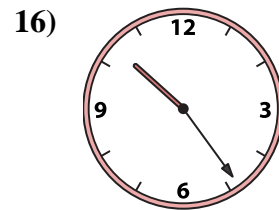
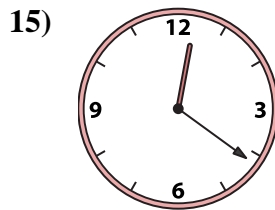
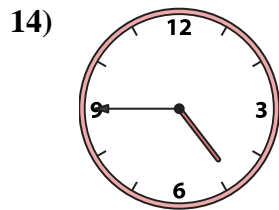
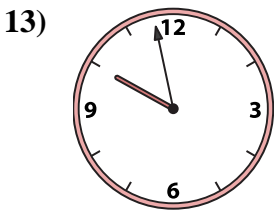
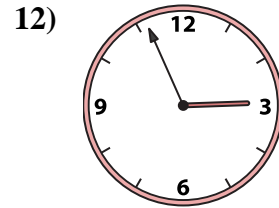
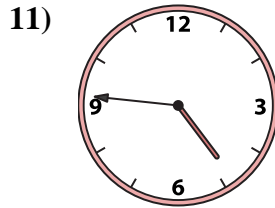
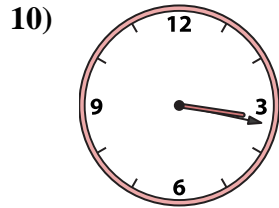
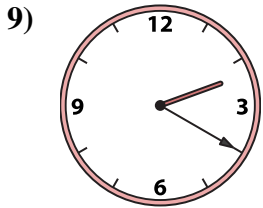
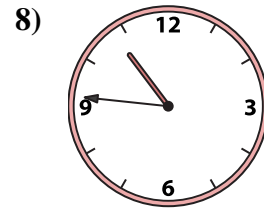
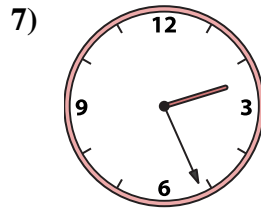
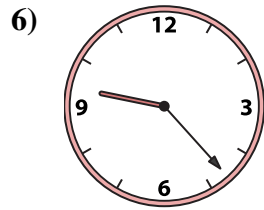

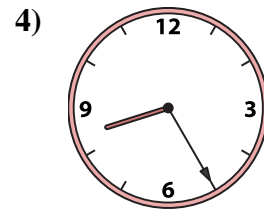
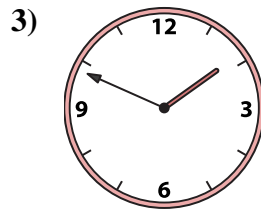
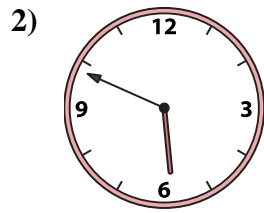
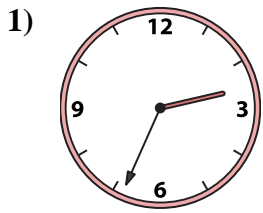
14. \_\_\_\_\_

15. \_\_\_\_\_

16. \_\_\_\_\_



Match the analog clock to the digital clock.



A. 12:21

B. 8:25

C. 1:49

D. 3:17

E. 2:56

F. 4:45

G. 2:20

H. 2:26

I. 4:46

J. 10:46

K. 9:23

L. 10:24

M. 5:49

N. 2:34

O. 9:58

P. 8:55

**Answers**

1. **N**

2. **M**

3. **C**

4. **B**

5. **P**

6. **K**

7. **H**

8. **J**

9. **G**

10. **D**

11. **I**

12. **E**

13. **O**

14. **F**

15. **A**

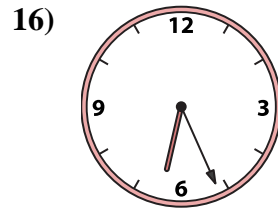
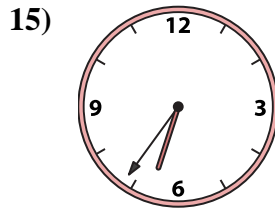
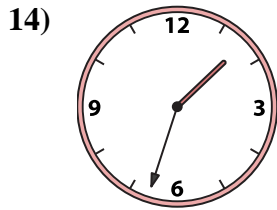
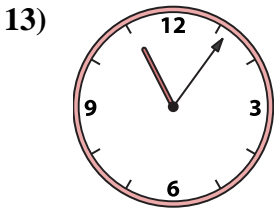
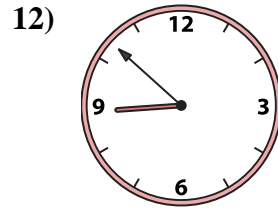
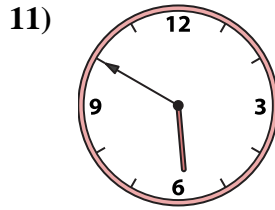
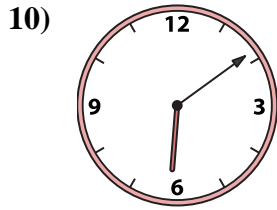

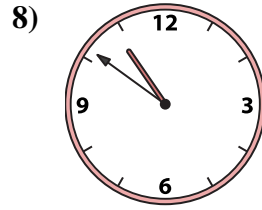
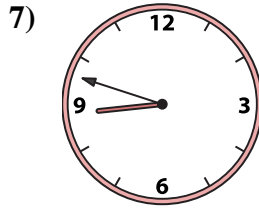
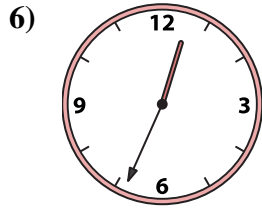

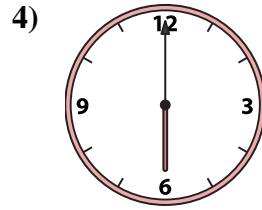
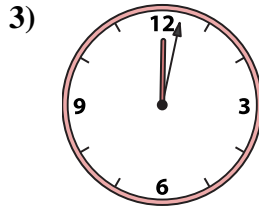


16. **L**





Match the analog clock to the digital clock.

**Answers**



A. 6:09

B. 1:33

C. 6:00

D. 6:36

E. 12:02

F. 2:11

G. 12:34

H. 10:51

I. 1:07

J. 8:48

K. 8:52

L. 5:50

M. 6:26

N. 10:57

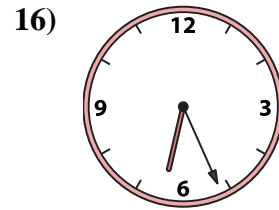
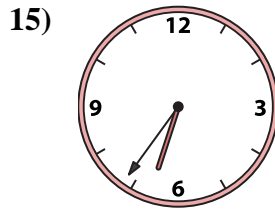
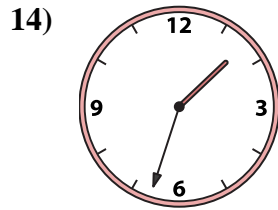
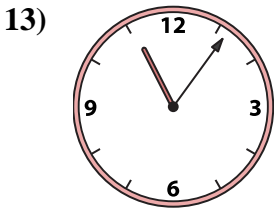
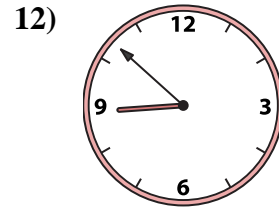
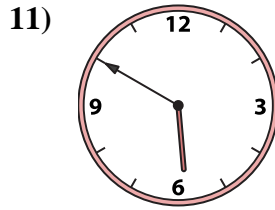
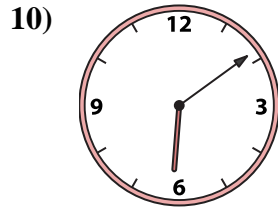

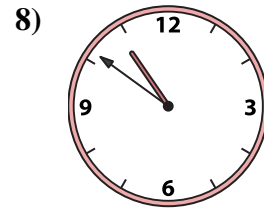
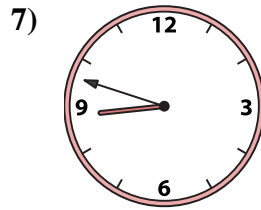
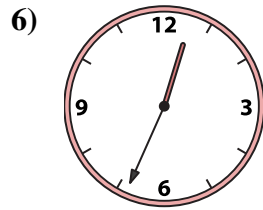
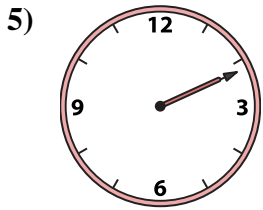
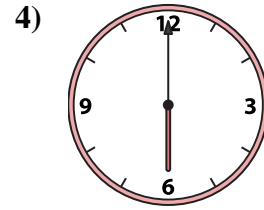
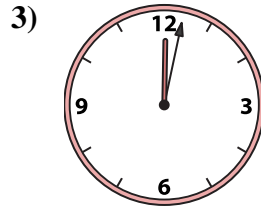
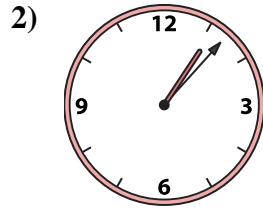
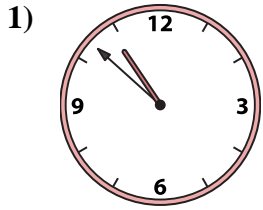
O. 10:52

P. 11:06

1. \_\_\_\_\_
2. \_\_\_\_\_
3. \_\_\_\_\_
4. \_\_\_\_\_
5. \_\_\_\_\_
6. \_\_\_\_\_
7. \_\_\_\_\_
8. \_\_\_\_\_
9. \_\_\_\_\_
10. \_\_\_\_\_
11. \_\_\_\_\_
12. \_\_\_\_\_
13. \_\_\_\_\_
14. \_\_\_\_\_
15. \_\_\_\_\_
16. \_\_\_\_\_



Match the analog clock to the digital clock.



A. **6:09**

B. **1:33**

C. **6:00**

D. **6:36**

E. **12:02**

F. **2:11**

G. **12:34**

H. **10:51**

I. **1:07**

J. **8:48**

K. **8:52**

L. **5:50**

M. **6:26**

N. **10:57**

O. **10:52**

P. **11:06**

**Answers**

1. **O**

2. **I**

3. **E**

4. **C**

5. **F**

6. **G**

7. **J**

8. **H**

9. **N**

10. **A**

11. **L**

12. **K**

13. **P**

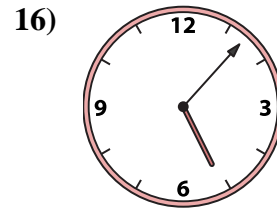
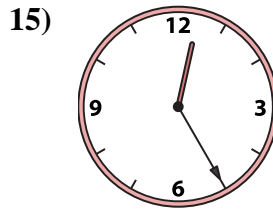
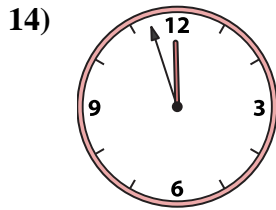
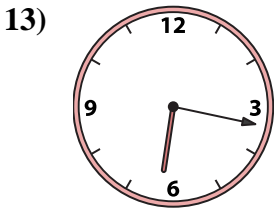
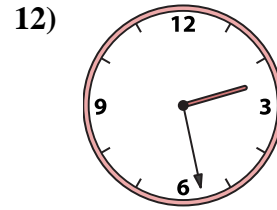
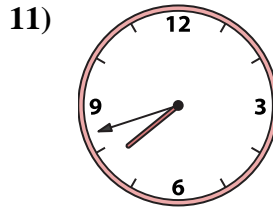
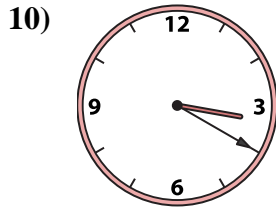
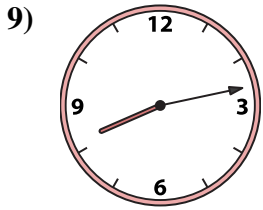
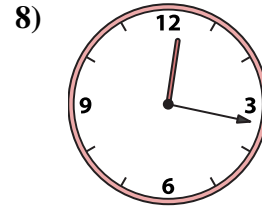

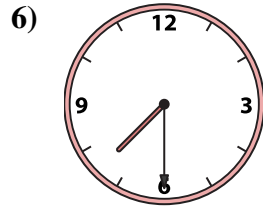
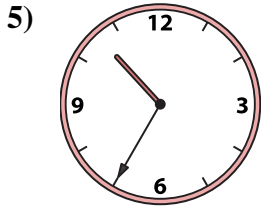
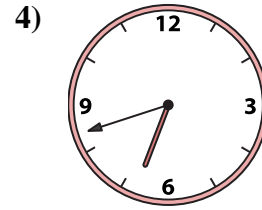
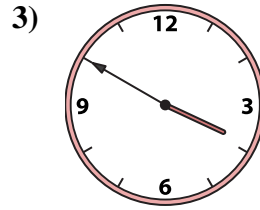
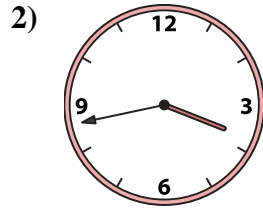
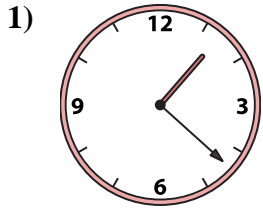
14. **B**

15. **D**

16. **M**



Match the analog clock to the digital clock.



**Answers**

1. \_\_\_\_\_

2. \_\_\_\_\_

3. \_\_\_\_\_

4. \_\_\_\_\_

5. \_\_\_\_\_

6. \_\_\_\_\_

7. \_\_\_\_\_

8. \_\_\_\_\_

9. \_\_\_\_\_

10. \_\_\_\_\_

11. \_\_\_\_\_

12. \_\_\_\_\_

13. \_\_\_\_\_

14. \_\_\_\_\_

15. \_\_\_\_\_

16. \_\_\_\_\_

A. 10:35

B. 2:28

C. 7:42

D. 12:33

E. 6:42

F. 1:22

G. 12:25

H. 6:17

I. 3:50

J. 3:20

K. 11:57

L. 5:07

M. 7:30

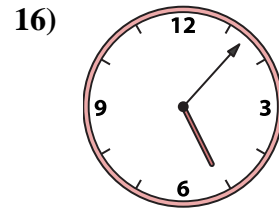
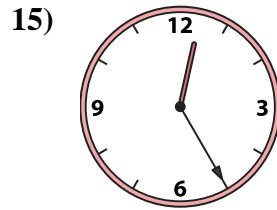
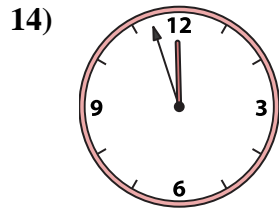
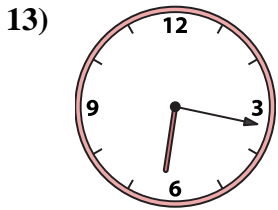
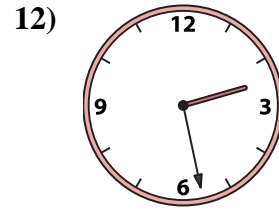
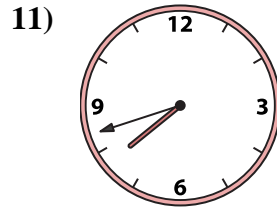
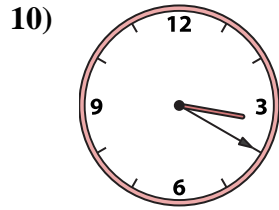
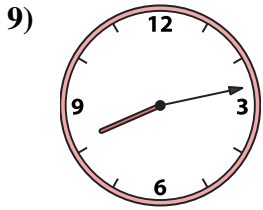
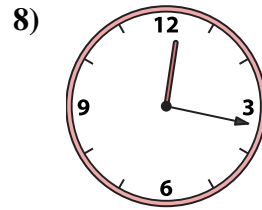
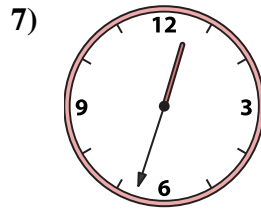
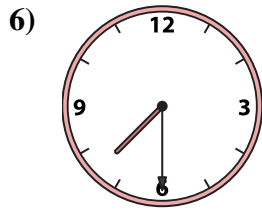
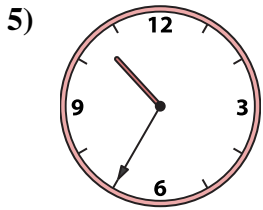
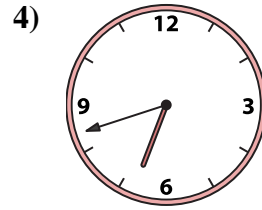
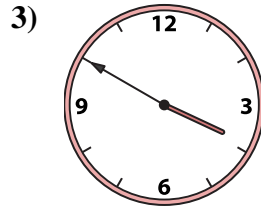
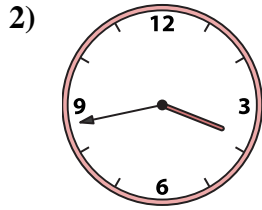
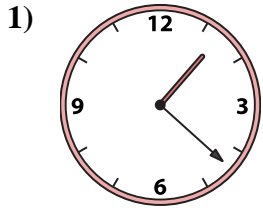
N. 3:43

O. 8:13

P. 12:17



Match the analog clock to the digital clock.



A. 10:35

B. 2:28

C. 7:42

D. 12:33

E. 6:42

F. 1:22

G. 12:25

H. 6:17

I. 3:50

J. 3:20

K. 11:57

L. 5:07

M. 7:30

N. 3:43

O. 8:13

P. 12:17

**Answers**

1. **F**

2. **N**

3. **I**

4. **E**

5. **A**

6. **M**

7. **D**

8. **P**

9. **O**

10. **J**

11. **C**

12. **B**

13. **H**

14. **K**

15. **G**

16. **L**