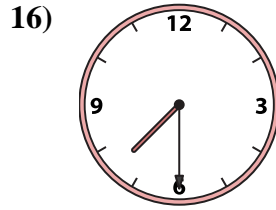
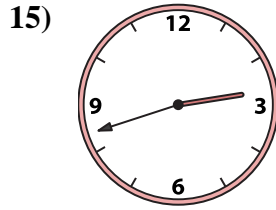
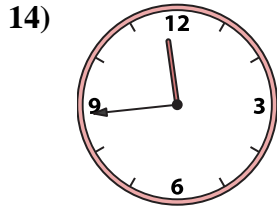
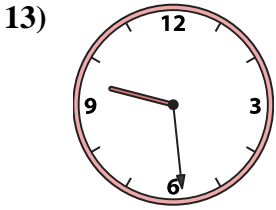
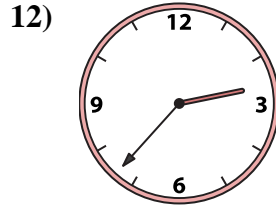
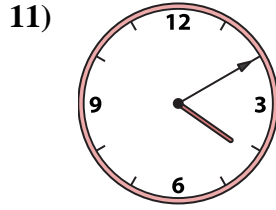
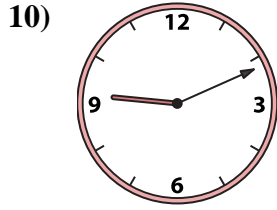
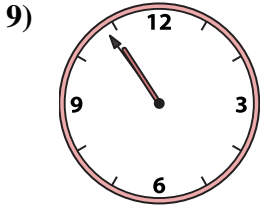
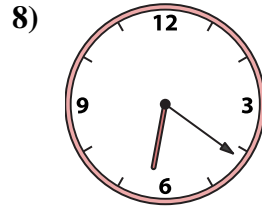
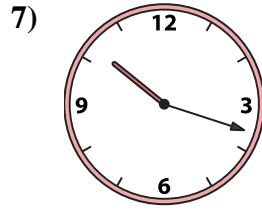
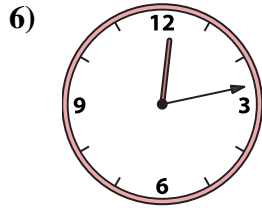
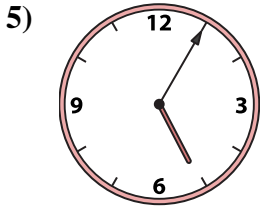
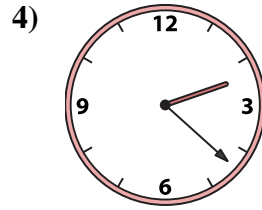
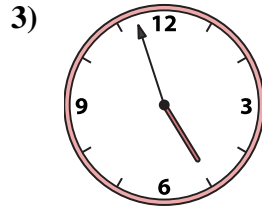
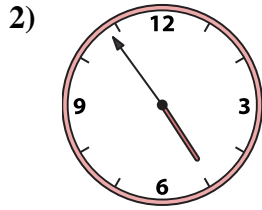
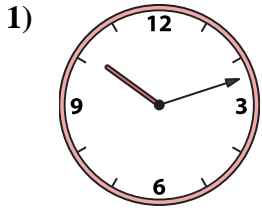




Match the analog clock to the digital clock.

Answers



1. _____
2. _____
3. _____
4. _____
5. _____
6. _____
7. _____
8. _____
9. _____
10. _____
11. _____
12. _____
13. _____
14. _____
15. _____
16. _____

A. 11:44

B. 4:10

C. 5:05

D. 10:12

E. 2:42

F. 12:13

G. 9:29

H. 9:11

I. 4:54

J. 4:57

K. 2:22

L. 10:54

M. 6:21

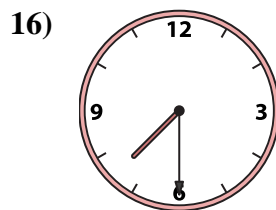
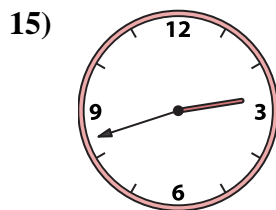
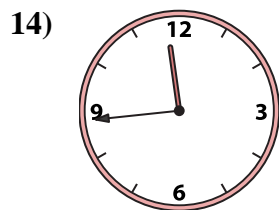
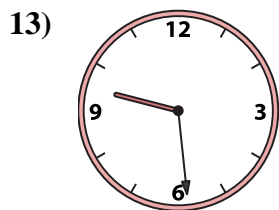
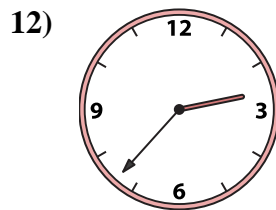
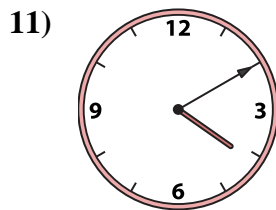
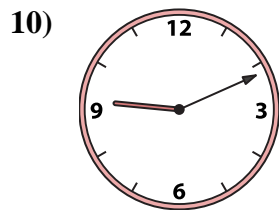
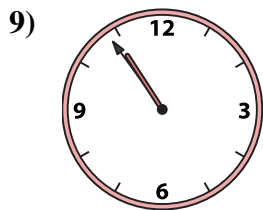
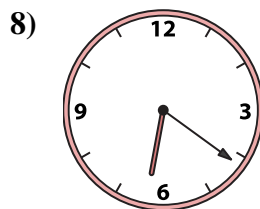
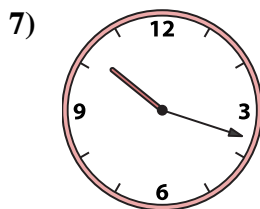

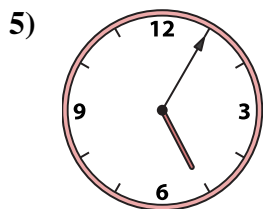
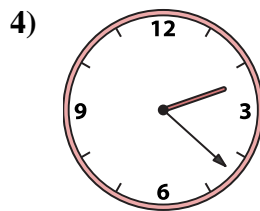
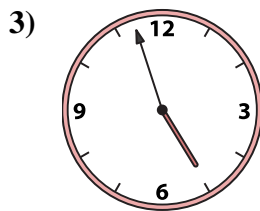
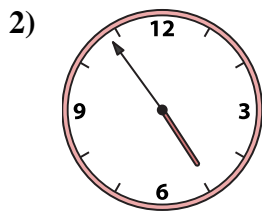
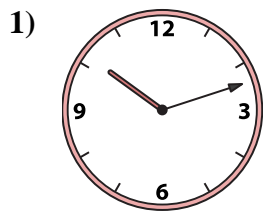
N. 10:18

O. 7:30

P. 2:37



Match the analog clock to the digital clock.



A. **11:44**

B. **4:10**

C. **5:05**

D. **10:12**

E. **2:42**

F. **12:13**

G. **9:29**

H. **9:11**

I. **4:54**

J. **4:57**

K. **2:22**

L. **10:54**

M. **6:21**

N. **10:18**

O. **7:30**

P. **2:37**

Answers

1. **D**

2. **I**

3. **J**

4. **K**

5. **C**

6. **F**

7. **N**

8. **M**

9. **L**

10. **H**

11. **B**

12. **P**

13. **G**

14. **A**

15. **E**

16. **O**