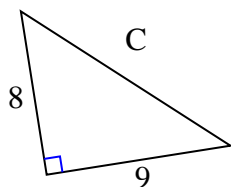




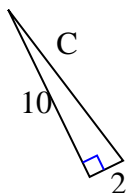
Find the value of 'C' round your answer to the nearest hundredth.

Answers

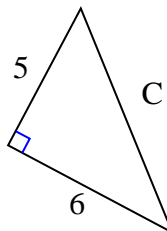
1)



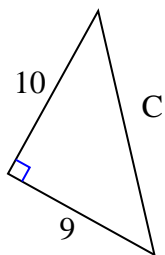
2)



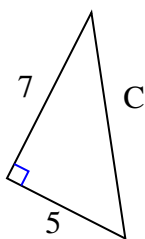
3)



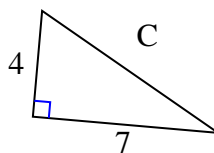
4)



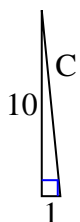
5)



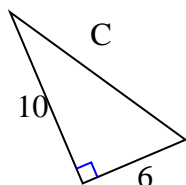
6)



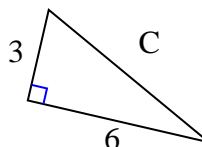
7)



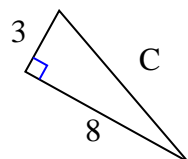
8)



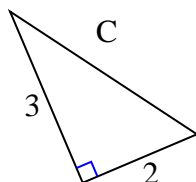
9)



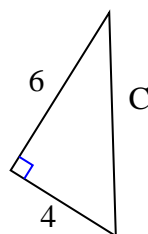
10)



11)



12)

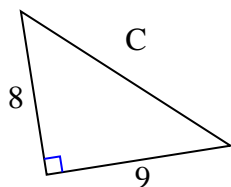


1. _____
2. _____
3. _____
4. _____
5. _____
6. _____
7. _____
8. _____
9. _____
10. _____
11. _____
12. _____



Find the value of 'C' round your answer to the nearest hundredth.

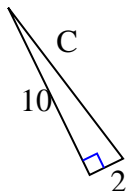
1)



$$64 + 81 = 145$$

$$\sqrt{145} = 12.04$$

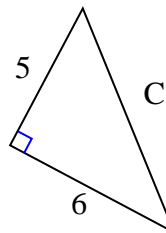
2)



$$100 + 4 = 104$$

$$\sqrt{104} = 10.2$$

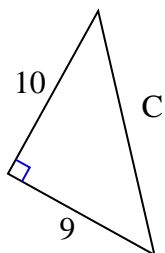
3)



$$25 + 36 = 61$$

$$\sqrt{61} = 7.81$$

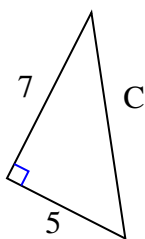
4)



$$100 + 81 = 181$$

$$\sqrt{181} = 13.45$$

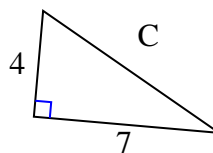
5)



$$49 + 25 = 74$$

$$\sqrt{74} = 8.6$$

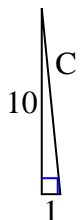
6)



$$16 + 49 = 65$$

$$\sqrt{65} = 8.06$$

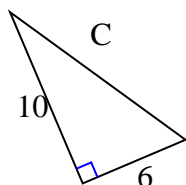
7)



$$100 + 1 = 101$$

$$\sqrt{101} = 10.05$$

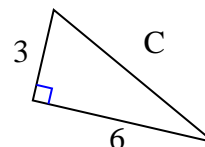
8)



$$100 + 36 = 136$$

$$\sqrt{136} = 11.66$$

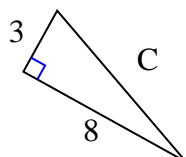
9)



$$9 + 36 = 45$$

$$\sqrt{45} = 6.71$$

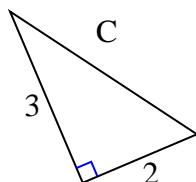
10)



$$9 + 64 = 73$$

$$\sqrt{73} = 8.54$$

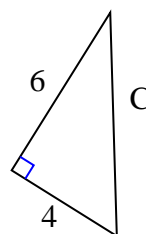
11)



$$9 + 4 = 13$$

$$\sqrt{13} = 3.61$$

12)



$$36 + 16 = 52$$

$$\sqrt{52} = 7.21$$

Answers

1. 12.04
2. 10.2
3. 7.81
4. 13.45
5. 8.6
6. 8.06
7. 10.05
8. 11.66
9. 6.71
10. 8.54
11. 3.61
12. 7.21