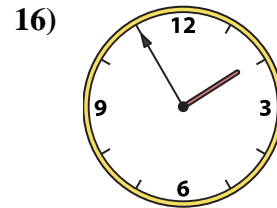
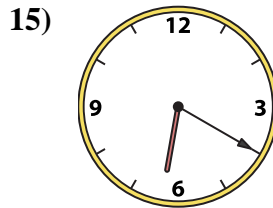
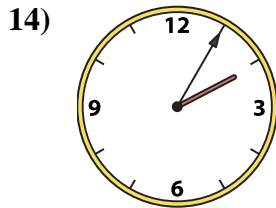
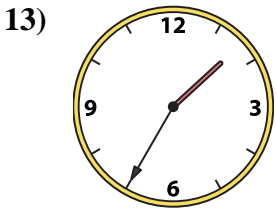
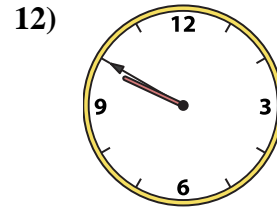
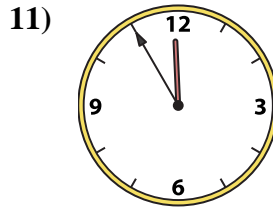
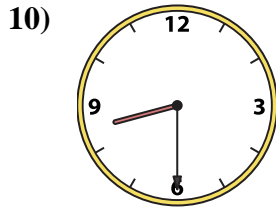
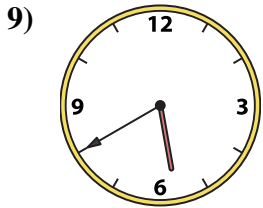
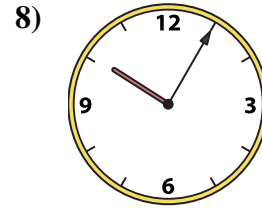
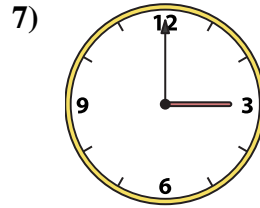
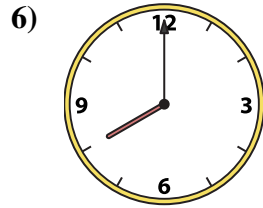

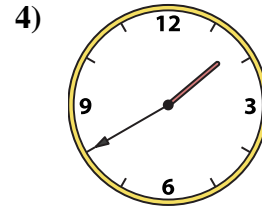
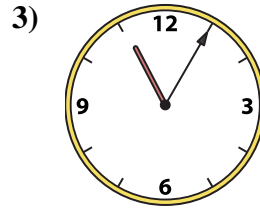
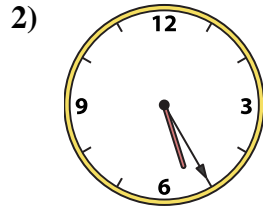
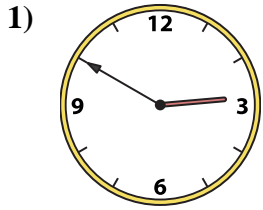




Match the analog clock to the digital clock.



Answers

1. _____
2. _____
3. _____
4. _____
5. _____
6. _____
7. _____
8. _____
9. _____
10. _____
11. _____
12. _____
13. _____
14. _____
15. _____
16. _____

A. 1:40

B. 9:50

C. 3:00

D. 11:55

E. 5:25

F. 12:55

G. 11:05

H. 8:00

I. 8:30

J. 1:55

K. 10:05

L. 2:05

M. 6:20


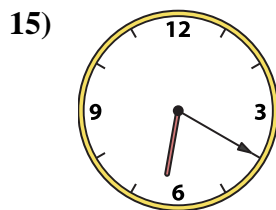
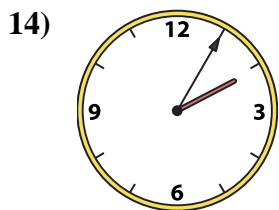

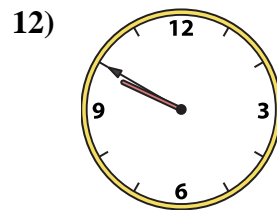
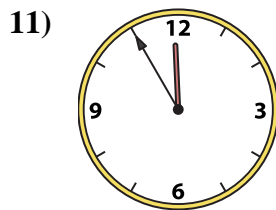
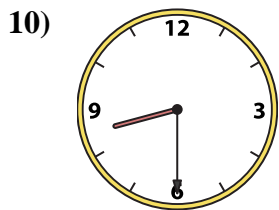
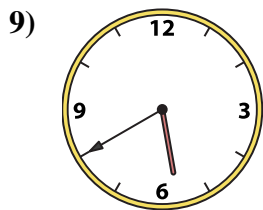
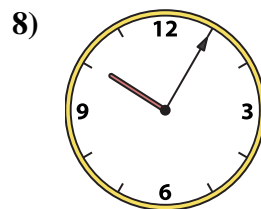
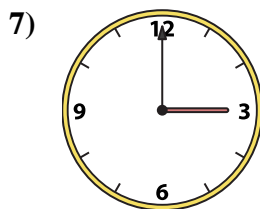
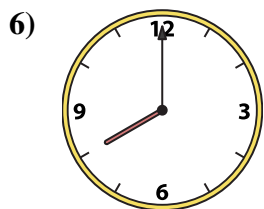
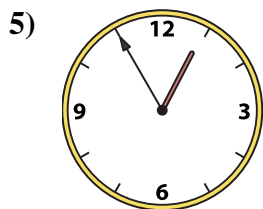
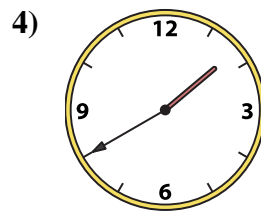
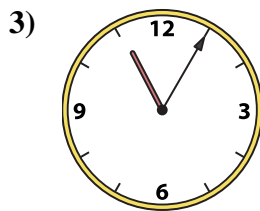
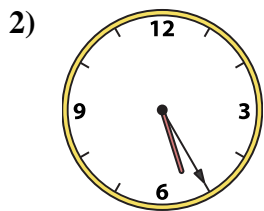
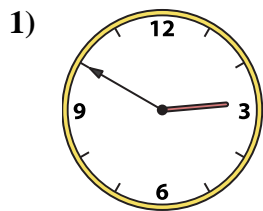
N. 2:50

O. 1:35

P. 5:40



Match the analog clock to the digital clock.



A. 1:40

B. 9:50

C. 3:00

D. 11:55

E. 5:25

F. 12:55

G. 11:05

H. 8:00

I. 8:30

J. 1:55

K. 10:05

L. 2:05

M. 6:20

N. 2:50

O. 1:35

P. 5:40

Answers

1. **N**

2. **E**

3. **G**

4. **A**

5. **F**

6. **H**

7. **C**

8. **K**

9. **P**

10. **I**

11. **D**

12. **B**

13. **O**

14. **L**

15. **M**

16. **J**