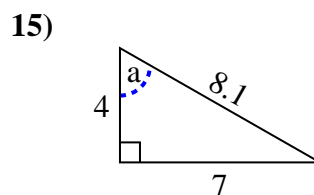
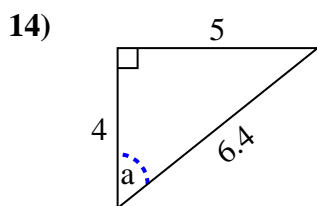
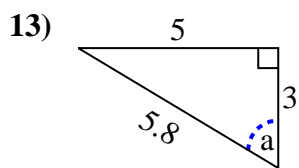
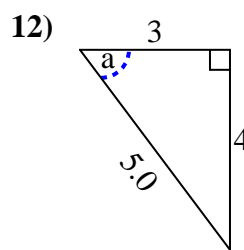
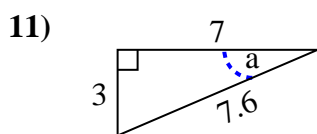
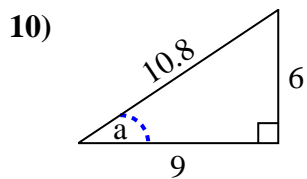
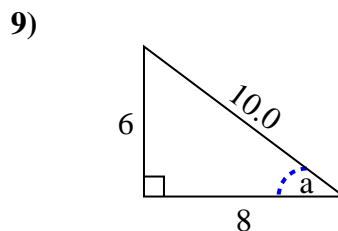
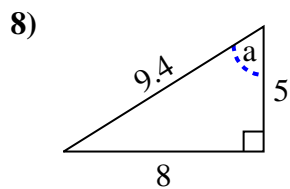
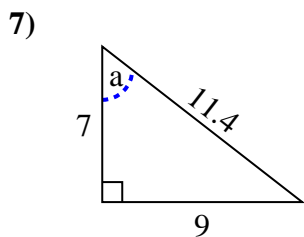
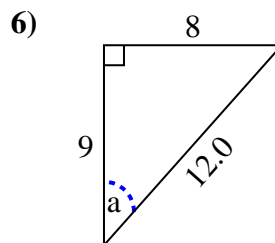
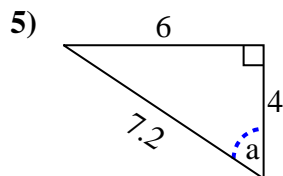
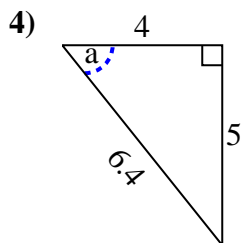
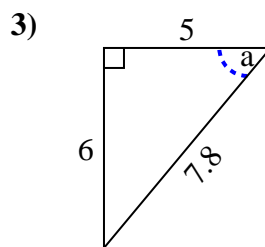
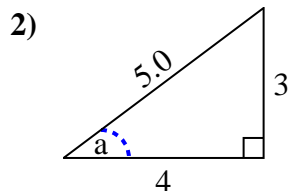
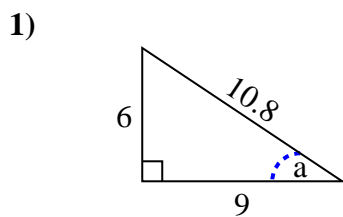


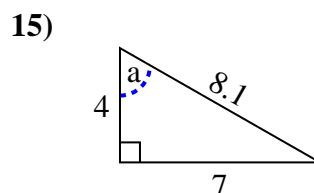
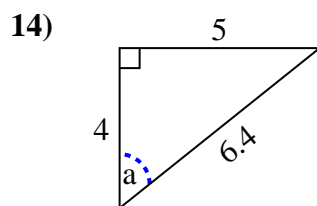
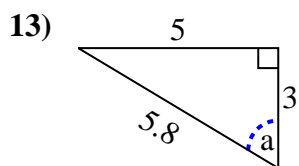
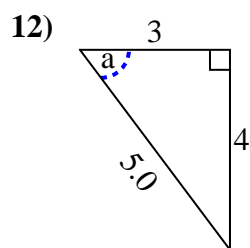
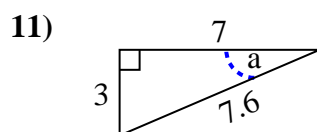
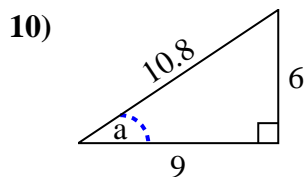
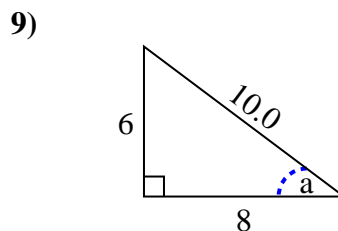
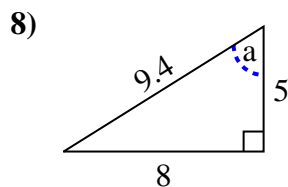
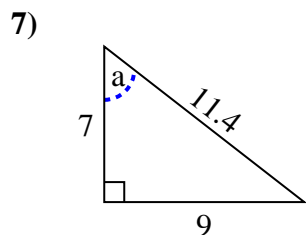
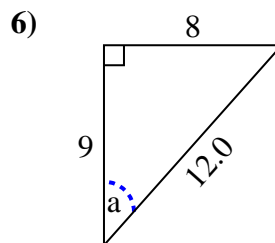
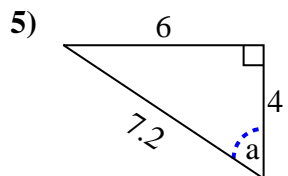
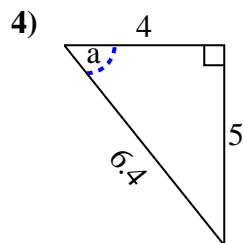
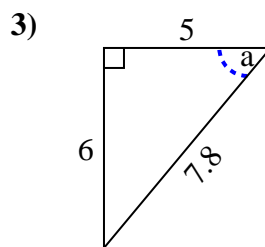
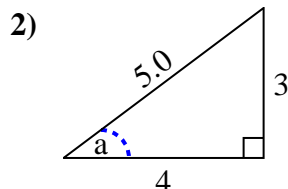
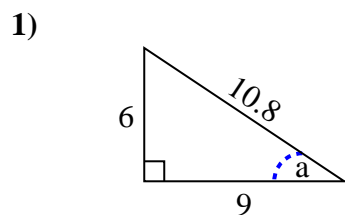


Identify the Opposite, Adjacent and Hypotenuse of Angle a.

Answers



1. \_\_\_\_\_
2. \_\_\_\_\_
3. \_\_\_\_\_
4. \_\_\_\_\_
5. \_\_\_\_\_
6. \_\_\_\_\_
7. \_\_\_\_\_
8. \_\_\_\_\_
9. \_\_\_\_\_
10. \_\_\_\_\_
11. \_\_\_\_\_
12. \_\_\_\_\_
13. \_\_\_\_\_
14. \_\_\_\_\_
15. \_\_\_\_\_

Identify the Opposite, Adjacent and Hypotenuse of Angle  $a$ .Answers1. 6, 9, 10.82. 3, 4, 5.03. 6, 5, 7.84. 5, 4, 6.45. 6, 4, 7.26. 8, 9, 12.07. 9, 7, 11.48. 8, 5, 9.49. 6, 8, 10.010. 6, 9, 10.811. 3, 7, 7.612. 4, 3, 5.013. 5, 3, 5.814. 5, 4, 6.415. 7, 4, 8.1