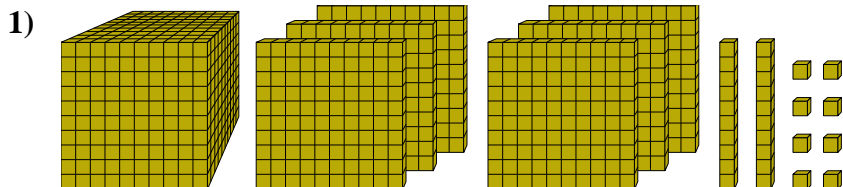




Solve each problem.

**Answers**

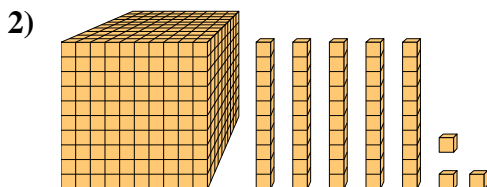


What digit is in the tens place in the number above?

1. \_\_\_\_\_

2. \_\_\_\_\_

3. \_\_\_\_\_

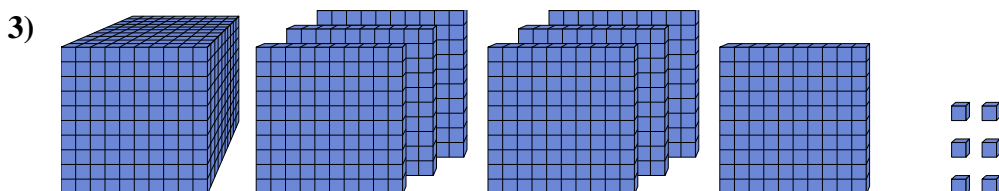


What digit is in the tens place in the number above?

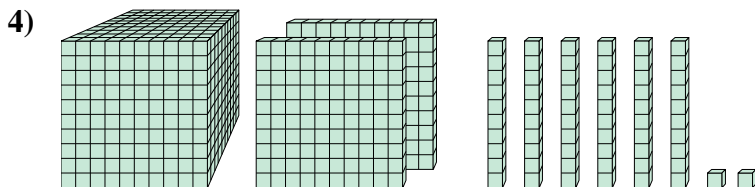
4. \_\_\_\_\_

5. \_\_\_\_\_

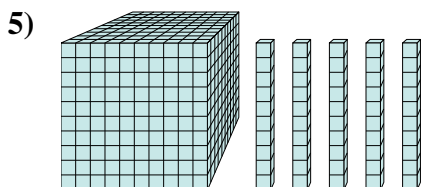
6. \_\_\_\_\_



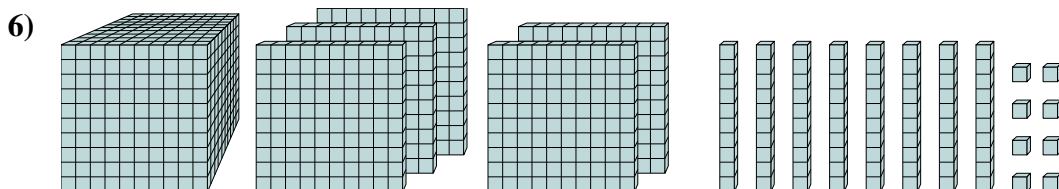
What digit is in the hundreds place in the number above?



What digit is in the thousands place in the number above?



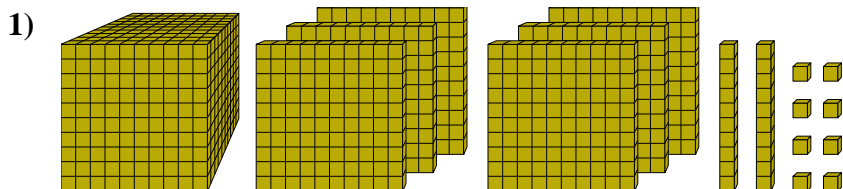
What digit is in the ones place in the number above?



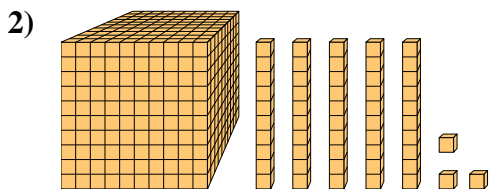
What digit is in the hundreds place in the number above?



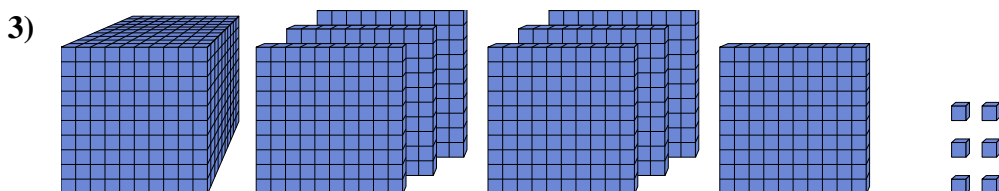
Solve each problem.



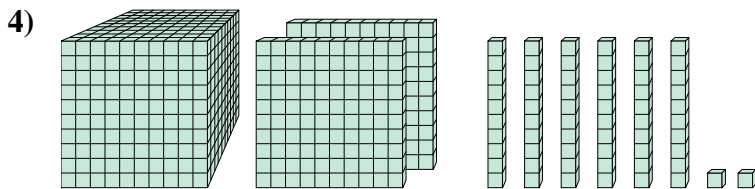
What digit is in the tens place in the number above?



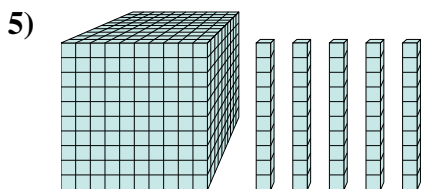
What digit is in the tens place in the number above?



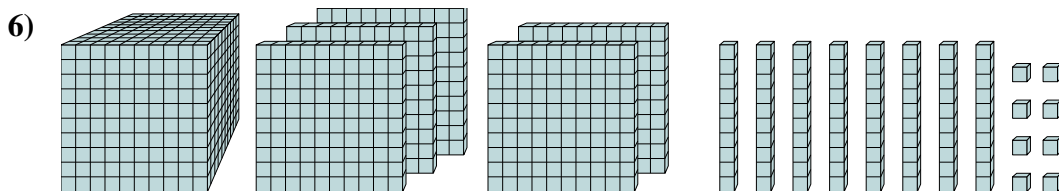
What digit is in the hundreds place in the number above?



What digit is in the thousands place in the number above?



What digit is in the ones place in the number above?



What digit is in the hundreds place in the number above?

**Answers**

1. 2

2. 5

3. 7

4. 1

5. 0

6. 5