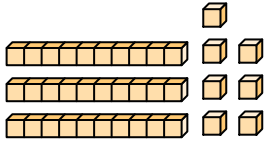




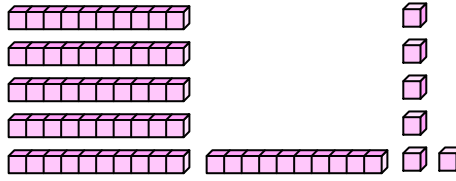
Count the total number of small blocks.

Answers

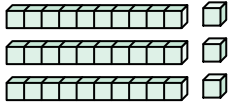
1)



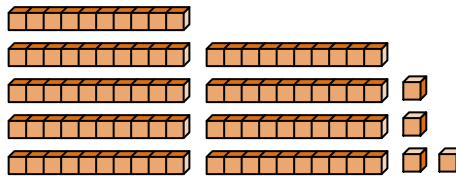
2)



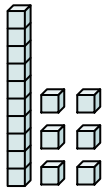
3)



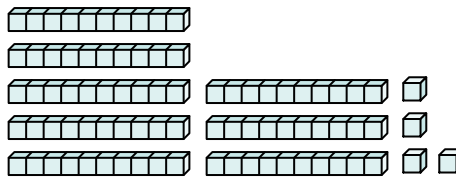
4)



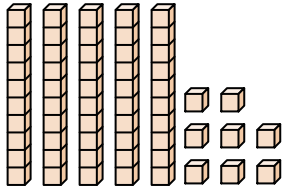
5)



6)



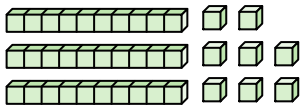
7)



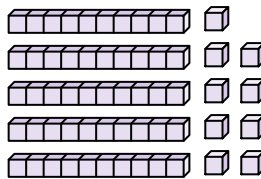
8)



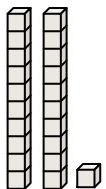
9)



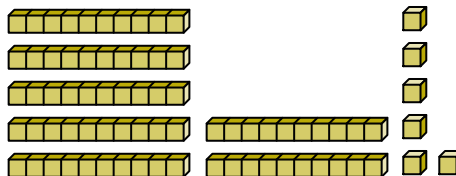
10)



11)



12)



1. _____

2. _____

3. _____

4. _____

5. _____

6. _____

7. _____

8. _____

9. _____

10. _____

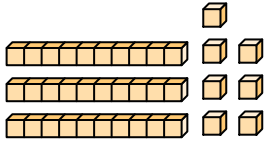
11. _____

12. _____

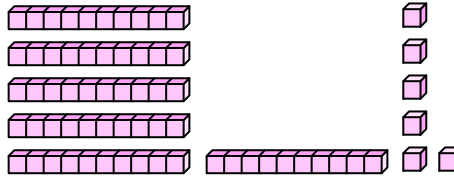


Count the total number of small blocks.

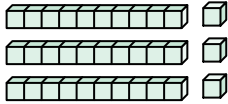
1)



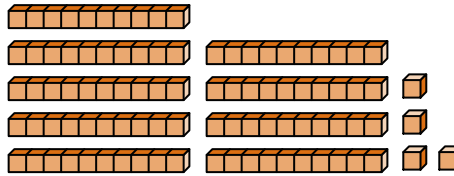
2)



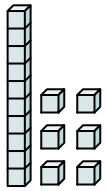
3)



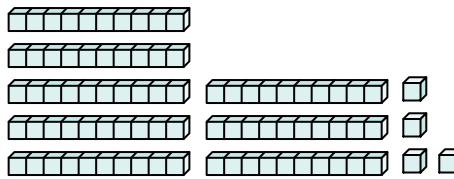
4)



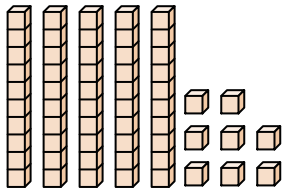
5)



6)



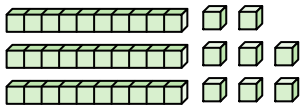
7)



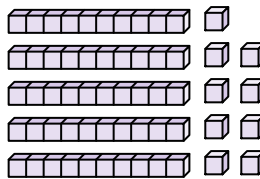
8)



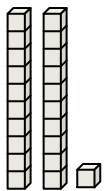
9)



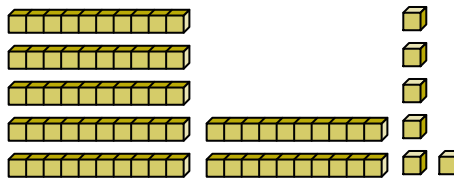
10)



11)



12)



Answers

1. 37

2. 66

3. 33

4. 94

5. 16

6. 84

7. 58

8. 11

9. 38

10. 59

11. 21

12. 76



Count the total number of small blocks.

84

38

16

94

37

66

59

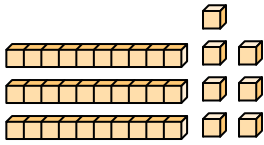
58

11

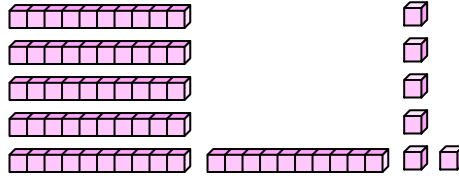
33

Answers

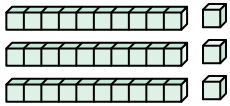
1)



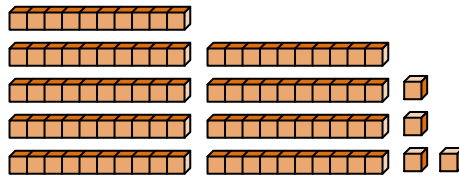
2)



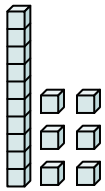
3)



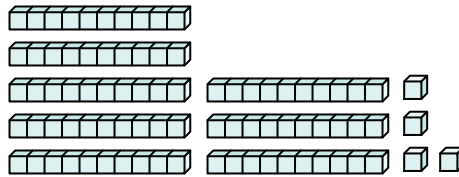
4)



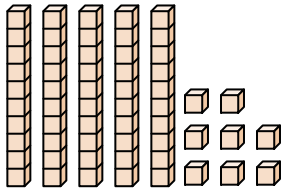
5)



6)



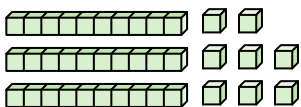
7)



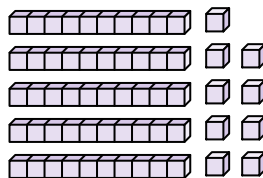
8)



9)



10)



1. _____

2. _____

3. _____

4. _____

5. _____

6. _____

7. _____

8. _____

9. _____

10. _____