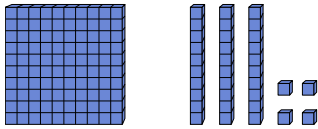




Find the value each set of blocks represents.

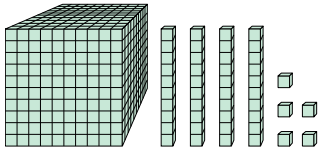
Answers

1)



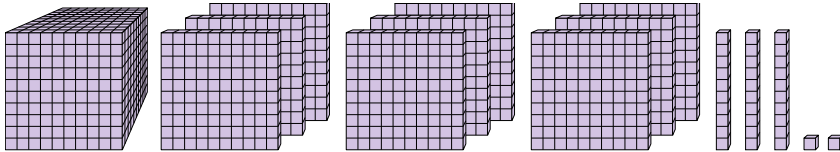
1. _____

2)



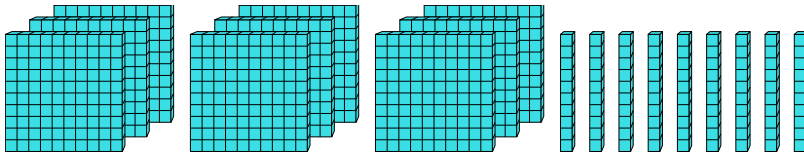
2. _____

3)



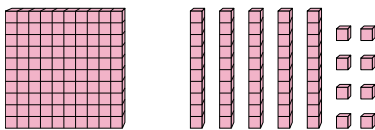
3. _____

4)



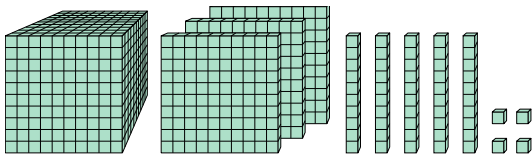
4. _____

5)



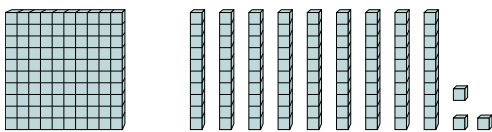
5. _____

6)



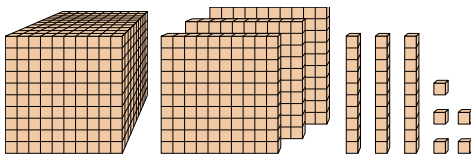
6. _____

7)



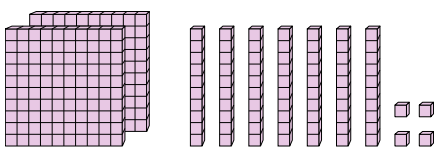
7. _____

8)



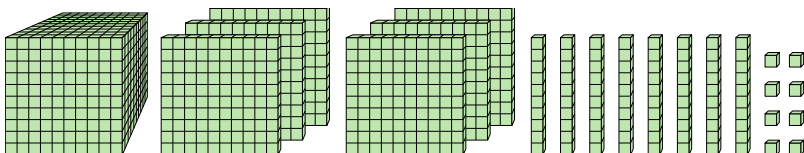
8. _____

9)



9. _____

10)

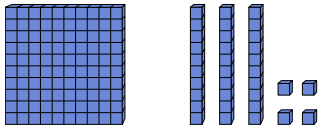


10. _____



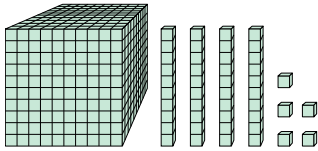
Find the value each set of blocks represents.

1)



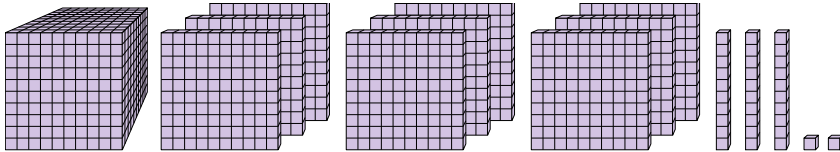
1. 134

2)



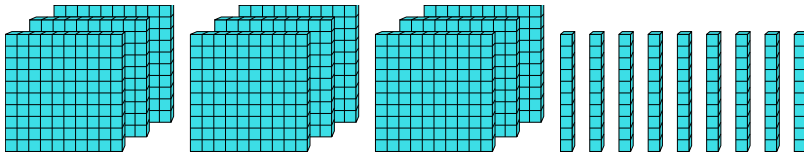
2. 1,045

3)



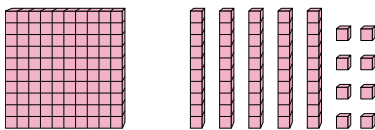
3. 1,932

4)



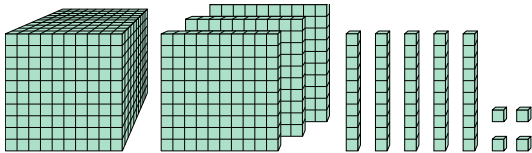
4. 990

5)



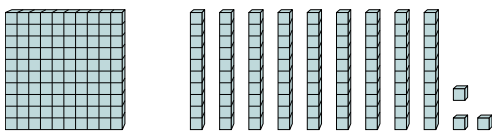
5. 158

6)



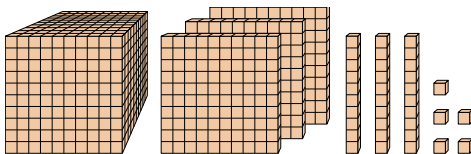
6. 1,354

7)



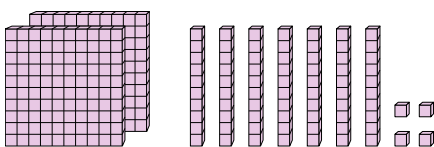
7. 193

8)



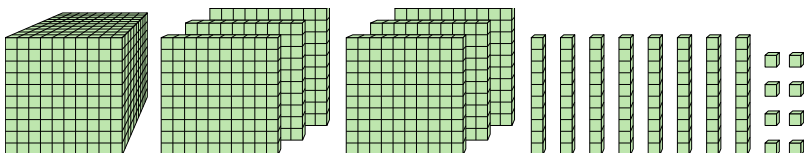
8. 1,335

9)



9. 274

10)



10. 1,688

Answers

1. 134

2. 1,045

3. 1,932

4. 990

5. 158

6. 1,354

7. 193

8. 1,335

9. 274

10. 1,688