




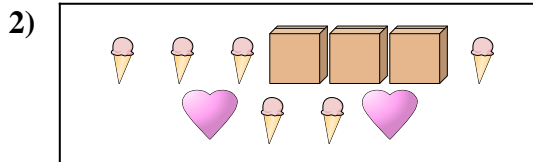
Compare the number of shapes.



Are there more or more ?

A.


B.



Are there more or more ?

A.


B.



Are there less or less ?

A.

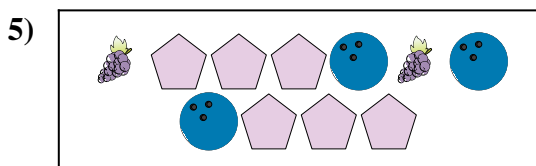
B.



Are there less or less ?

A.


B.



Are there less or less ?

A.

B.



Are there less or less ?

A.

B.

**Answers**

1. \_\_\_\_\_

2. \_\_\_\_\_

3. \_\_\_\_\_


4. \_\_\_\_\_

5. \_\_\_\_\_


6. \_\_\_\_\_




Compare the number of shapes.




Are there more or more ?



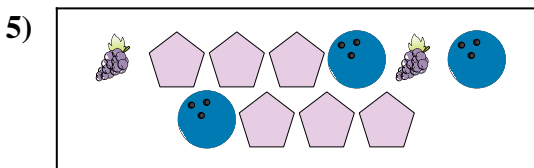
Are there more or more ?




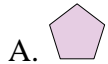
Are there less or less ?



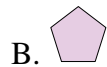
Are there less or less ?



Are there less or less ?



Are there less or less ?



**Answers**

1. **B**

2. **B**

3. **A**

4. **A**

5. **B**

6. **B**