





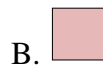
Compare the number of shapes.



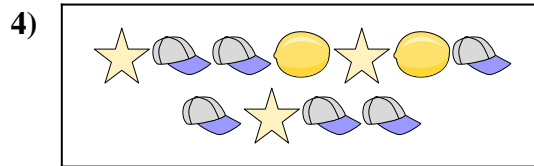
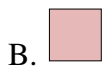
Are there less or less ?




Are there more or more ?




Are there more or more ?



Are there more or more ?



Are there less or less ?



Are there less or less ?



Answers

1. _____

2. _____

3. _____

4. _____

5. _____

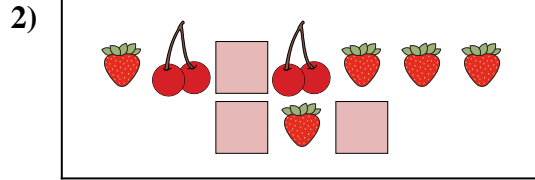
6. _____




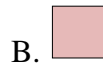
Compare the number of shapes.



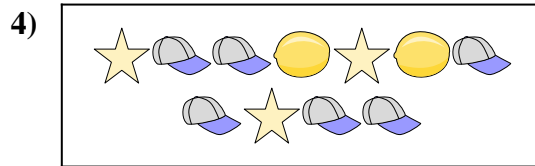
Are there less or less ?




Are there more or more ?




Are there more or more ?



Are there more or more ?



Are there less or less ?



Are there less or less ?



Answers

1. **A**

2. **A**

3. **A**

4. **B**

5. **B**

6. **A**