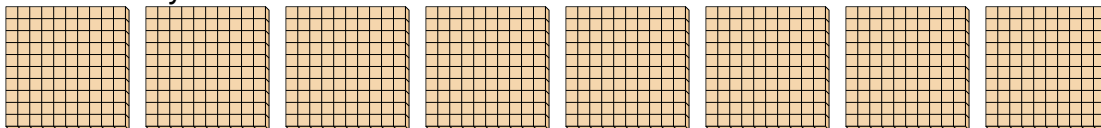




Use the groups to answer each question.

Answers

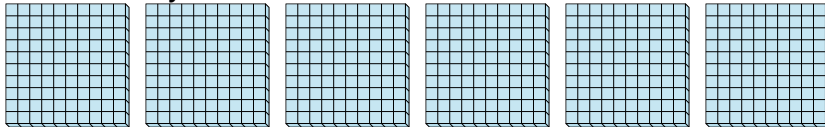
- 1) a. How many groups of 100 are there?
b. How many small blocks are there total?



1. ____

2. ____

- 2) a. How many groups of 100 are there?
b. How many small blocks are there total?

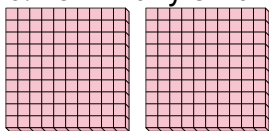


3. ____

4. ____

5. ____


- 3) a. How many groups of 100 are there?
b. How many small blocks are there total?



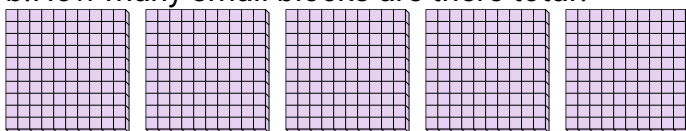
6. ____

7. ____

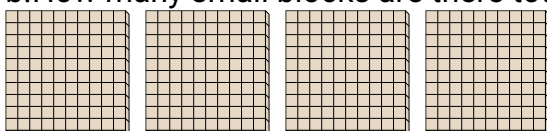
- 4) a. How many groups of 100 are there?
b. How many small blocks are there total?




- 5) a. How many groups of 100 are there?
b. How many small blocks are there total?



- 6) a. How many groups of 100 are there?
b. How many small blocks are there total?



- 7) a. How many groups of 100 are there?
b. How many small blocks are there total?

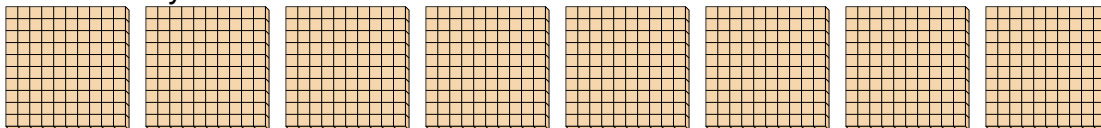




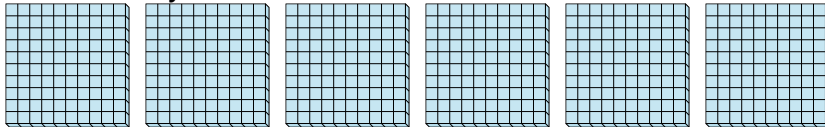
Use the groups to answer each question.

Answers

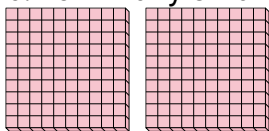
- 1) a. How many groups of 100 are there?
b. How many small blocks are there total?

1. 8 8002. 6 6003. 2 200


- 2) a. How many groups of 100 are there?
b. How many small blocks are there total?

4. 9 9005. 5 500

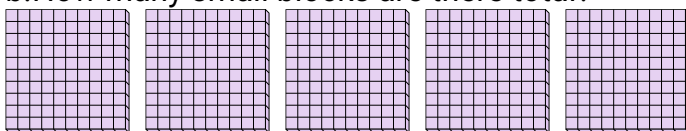
- 3) a. How many groups of 100 are there?
b. How many small blocks are there total?

6. 4 4007. 7 700

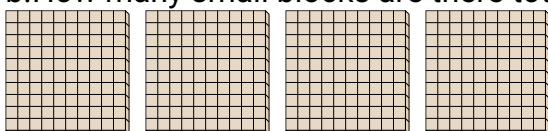
- 4) a. How many groups of 100 are there?
b. How many small blocks are there total?



- 5) a. How many groups of 100 are there?
b. How many small blocks are there total?



- 6) a. How many groups of 100 are there?
b. How many small blocks are there total?



- 7) a. How many groups of 100 are there?
b. How many small blocks are there total?

