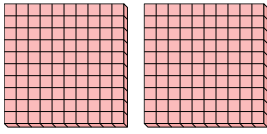




Use the groups to answer each question.

Answers

- 1) a. How many groups of 100 are there?
- b. How many small blocks are there total?




1. ____

2. ____

3. ____

- 2) a. How many groups of 100 are there?
- b. How many small blocks are there total?




4. ____

5. ____

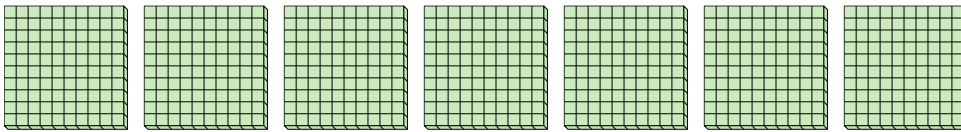
6. ____

- 3) a. How many groups of 100 are there?
- b. How many small blocks are there total?




7. ____

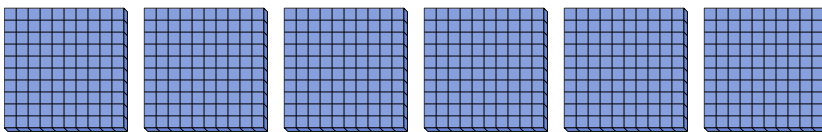
- 4) a. How many groups of 100 are there?
- b. How many small blocks are there total?



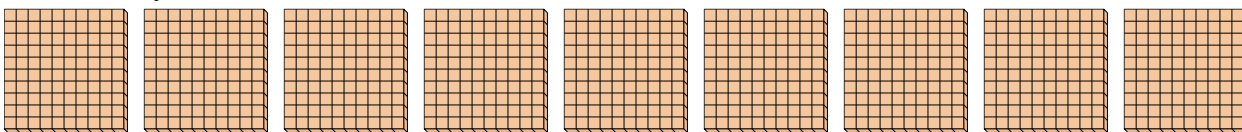
- 5) a. How many groups of 100 are there?
- b. How many small blocks are there total?



- 6) a. How many groups of 100 are there?
- b. How many small blocks are there total?



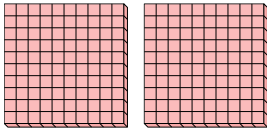
- 7) a. How many groups of 100 are there?
- b. How many small blocks are there total?



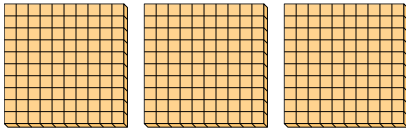


Use the groups to answer each question.


- 1) a. How many groups of 100 are there?
- b. How many small blocks are there total?



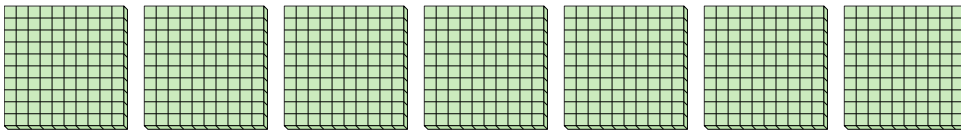
- 2) a. How many groups of 100 are there?
- b. How many small blocks are there total?




- 3) a. How many groups of 100 are there?
- b. How many small blocks are there total?



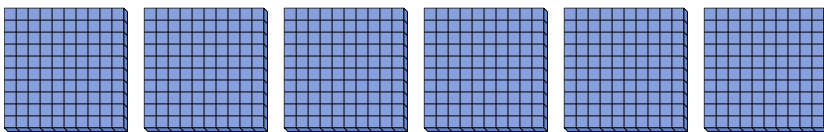
- 4) a. How many groups of 100 are there?
- b. How many small blocks are there total?



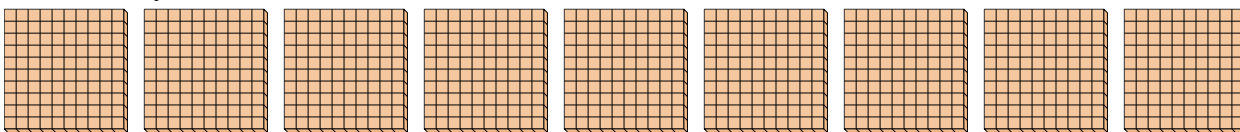
- 5) a. How many groups of 100 are there?
- b. How many small blocks are there total?



- 6) a. How many groups of 100 are there?
- b. How many small blocks are there total?



- 7) a. How many groups of 100 are there?
- b. How many small blocks are there total?



Answers

- 1. 2 200
- 2. 3 300
- 3. 5 500
- 4. 7 700
- 5. 8 800
- 6. 6 600
- 7. 9 900