



Write an inequality to express the number line.



Answers

Ex. $x \geq -3$



1. _____



2. _____



3. _____



4. _____



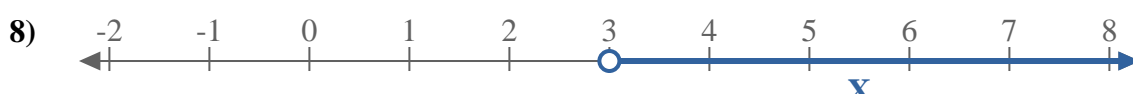
5. _____



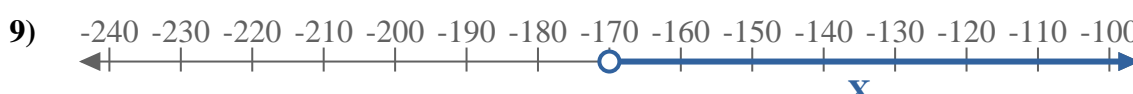
6. _____



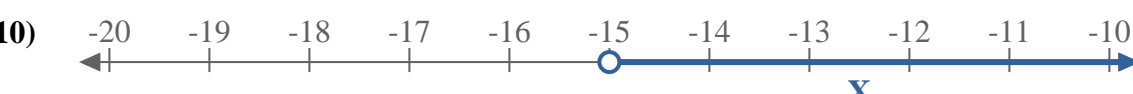
7. _____



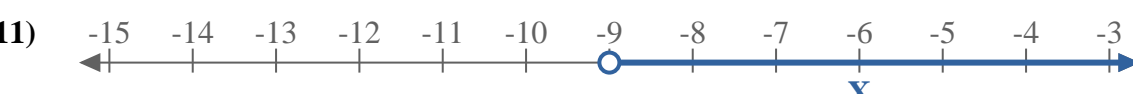
8. _____



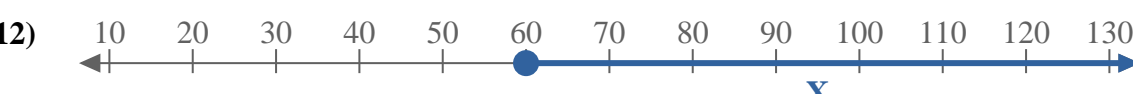
9. _____



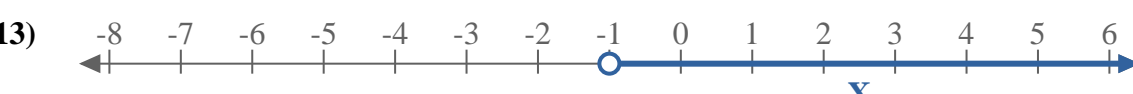
10. _____



11. _____



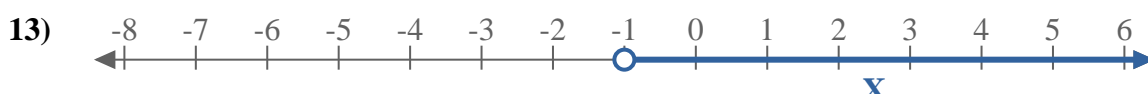
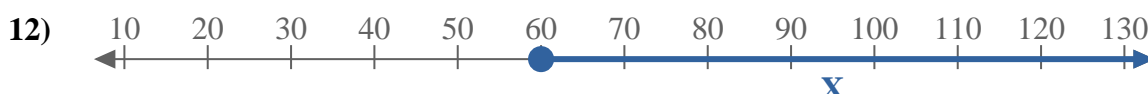
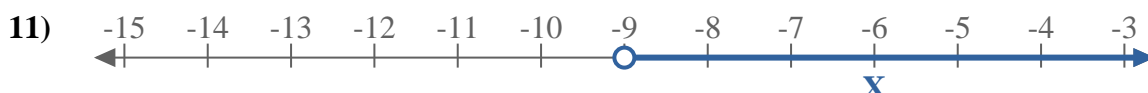
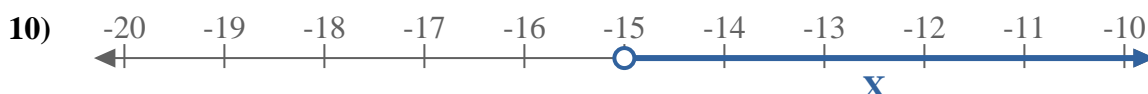
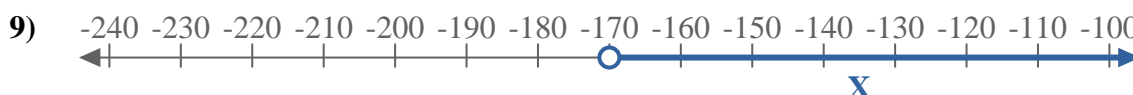
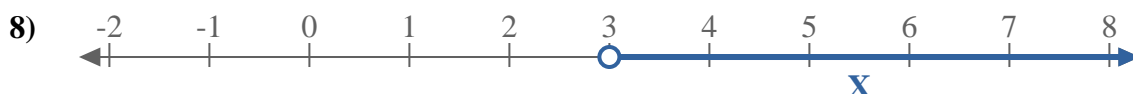
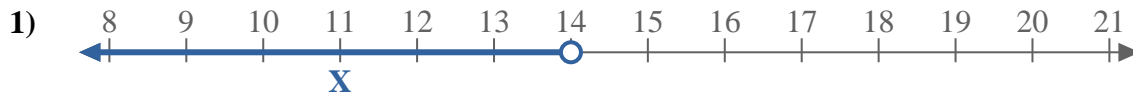
12. _____



13. _____



Write an inequality to express the number line.



Answers

Ex. $X \geq -3$

1. $X < 14$

2. $X \leq 5$

3. $X \leq -19$

4. $X < -120$

5. $X \geq 115$

6. $X \leq 5$

7. $X \geq -70$

8. $X > 3$

9. $X > -170$

10. $X > -15$

11. $X > -9$

12. $X \geq 60$

13. $X > -1$