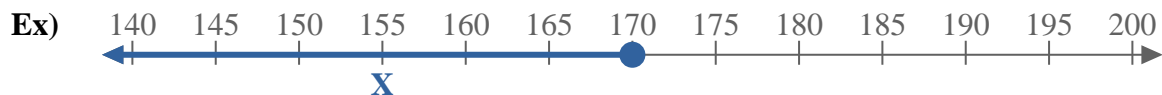


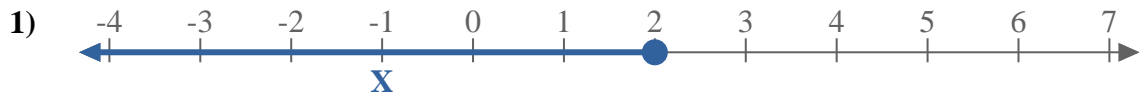


Write an inequality to express the number line.



**Answers**

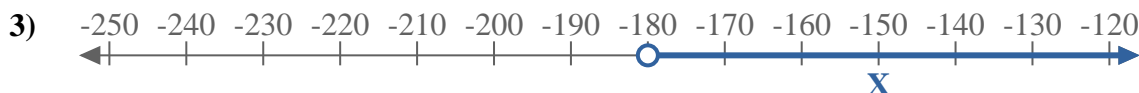
Ex.  $X \leq 170$



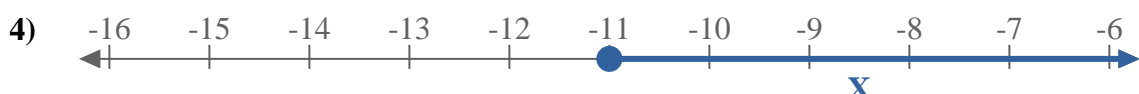
1. \_\_\_\_\_



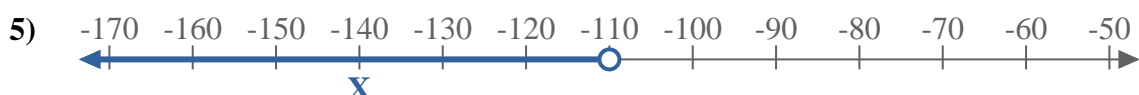
2. \_\_\_\_\_



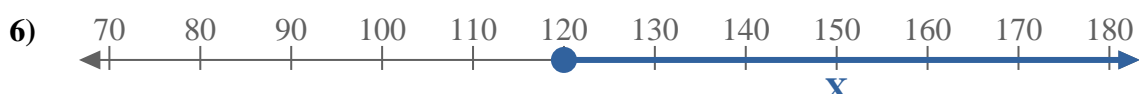
3. \_\_\_\_\_



4. \_\_\_\_\_



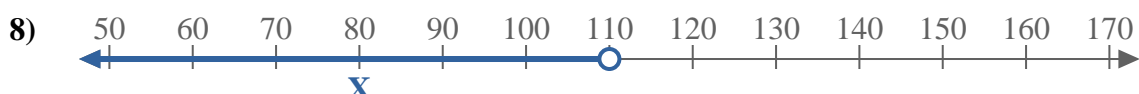
5. \_\_\_\_\_



6. \_\_\_\_\_



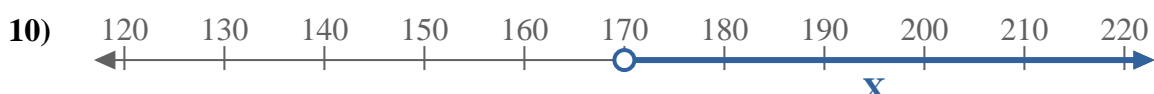
7. \_\_\_\_\_



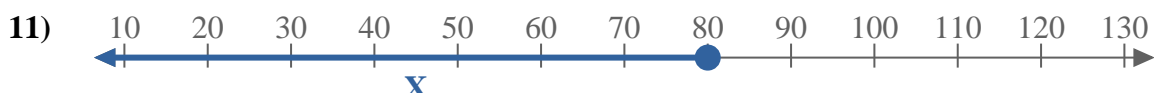
8. \_\_\_\_\_



9. \_\_\_\_\_



10. \_\_\_\_\_



11. \_\_\_\_\_



12. \_\_\_\_\_



13. \_\_\_\_\_



Write an inequality to express the number line.



**Answers**

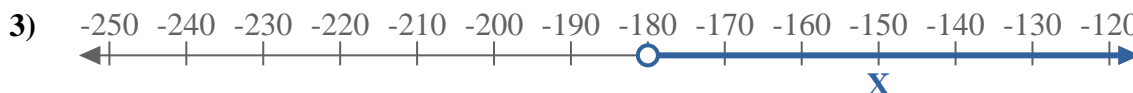
Ex.  $X \leq 170$



1.  $X \leq 2$



2.  $X \leq -75$



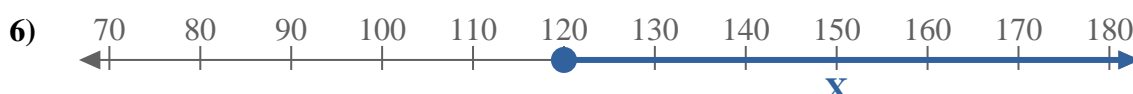
3.  $X > -180$



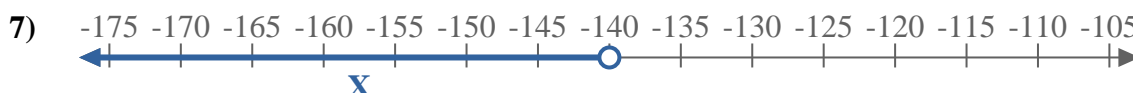
4.  $X \geq -11$



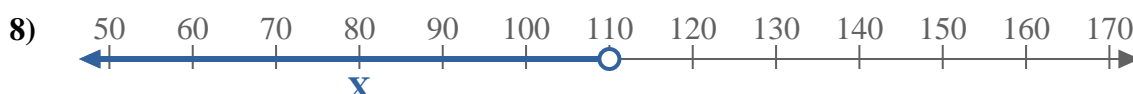
5.  $X < -110$



6.  $X \geq 120$



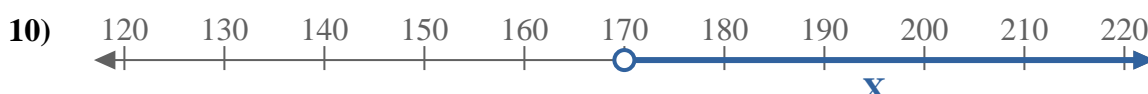
7.  $X < -140$



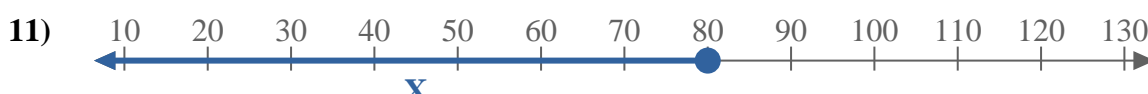
8.  $X < 110$



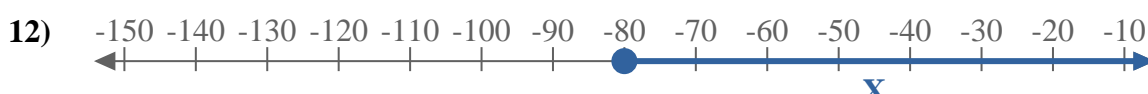
9.  $X < 70$



10.  $X > 170$



11.  $X \leq 80$



12.  $X \geq -80$



13.  $X \geq -18$