



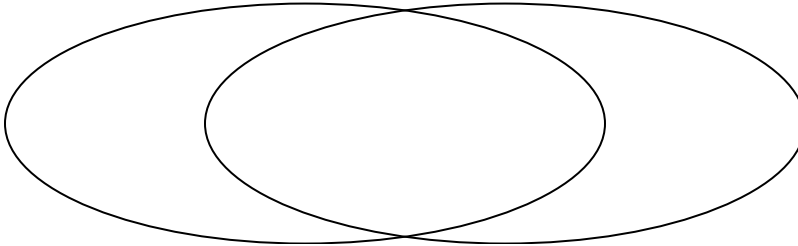
Solve each problem.

1) The table below shows the information on several pizza places. Use the chart to fill in the Venn Diagram.

	Oven Baked	John's Pizza	Luigi's Pizza	Italy's Best	Slice of Life	Za Pizza
Quality	Low	High	High	High	High	High
Type	Chain	Chain	Chain	Family Owned	Family Owned	Chain

High Quality

Chain Store

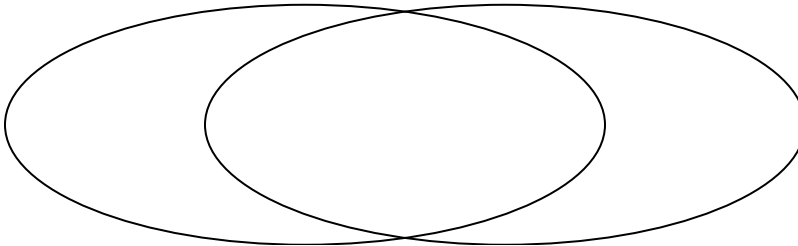


2) The table below shows the physical traits of several pets in a pet shelter. Use the chart to fill in the Venn Diagram.

	Coco	Fluffy	Bubbles	Emily	Alfus	Sparkles
Breed	Pure	Pure	Mixed	Pure	Mixed	Pure
Fur Color	Gray	Brown	Gray	Brown	Gray	Gray

Pure Breed

Gray Fur



3) The table below shows the physical traits of different students. Use the chart to fill in the Venn Diagram.

	Tom	Rey	Jane	Gary	Dan	Zoe
Dominant Hand	Right	Left	Right	Left	Left	Left
Pet	Cat	Dog	Cat	Cat	Cat	Cat

Left Handed

Cat





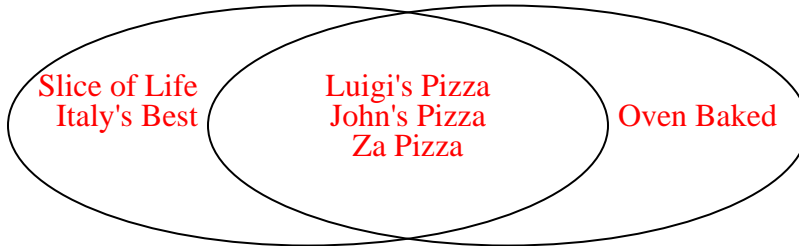
Solve each problem.

- 1) The table below shows the information on several pizza places. Use the chart to fill in the Venn Diagram.

	Oven Baked	John's Pizza	Luigi's Pizza	Italy's Best	Slice of Life	Za Pizza
Quality	Low	High	High	High	High	High
Type	Chain	Chain	Chain	Family Owned	Family Owned	Chain

High Quality

Chain Store

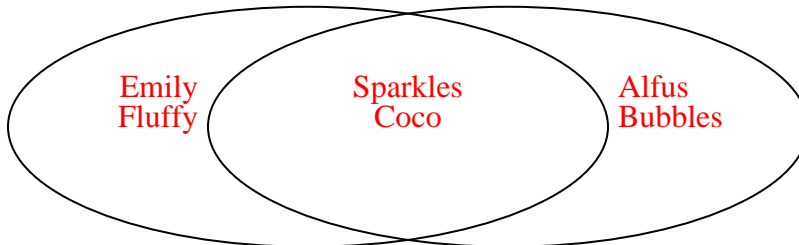


- 2) The table below shows the physical traits of several pets in a pet shelter. Use the chart to fill in the Venn Diagram.

	Coco	Fluffy	Bubbles	Emily	Alfus	Sparkles
Breed	Pure	Pure	Mixed	Pure	Mixed	Pure
Fur Color	Gray	Brown	Gray	Brown	Gray	Gray

Pure Breed

Gray Fur



- 3) The table below shows the physical traits of different students. Use the chart to fill in the Venn Diagram.

	Tom	Rey	Jane	Gary	Dan	Zoe
Dominant Hand	Right	Left	Right	Left	Left	Left
Pet	Cat	Dog	Cat	Cat	Cat	Cat

Left Handed

Cat

